



Déterminez quelle fraction est situ e entre les fraction compar ees.

R ponses

1)  $\frac{2}{3}$  <  <  $\frac{7}{8}$

$\frac{3}{8}$        $\frac{3}{4}$

$\frac{1}{6}$        $\frac{2}{4}$

2)  $\frac{3}{8}$  <  <  $\frac{7}{8}$

$\frac{1}{6}$        $\frac{1}{8}$

$\frac{1}{4}$        $\frac{4}{8}$

3)  $\frac{2}{4}$  <  <  $\frac{3}{4}$

$\frac{1}{6}$        $\frac{2}{6}$

$\frac{1}{8}$        $\frac{5}{8}$

4)  $\frac{4}{8}$  <  <  $\frac{6}{8}$

$\frac{3}{8}$        $\frac{2}{3}$

$\frac{5}{6}$        $\frac{1}{3}$

5)  $\frac{1}{8}$  <  <  $\frac{1}{3}$

$\frac{3}{6}$        $\frac{5}{8}$

$\frac{1}{4}$        $\frac{4}{6}$

6)  $\frac{2}{4}$  <  <  $\frac{6}{8}$

$\frac{5}{6}$        $\frac{1}{6}$

$\frac{3}{8}$        $\frac{5}{8}$

7)  $\frac{1}{8}$  <  <  $\frac{3}{8}$

$\frac{1}{6}$        $\frac{7}{8}$

$\frac{1}{2}$        $\frac{5}{6}$

8)  $\frac{2}{8}$  <  <  $\frac{2}{3}$

$\frac{1}{8}$        $\frac{1}{6}$

$\frac{1}{2}$        $\frac{7}{8}$

9)  $\frac{5}{8}$  <  <  $\frac{6}{8}$

$\frac{1}{8}$        $\frac{2}{8}$        $\frac{5}{6}$        $\frac{4}{6}$

10)  $\frac{1}{6}$  <  <  $\frac{4}{8}$

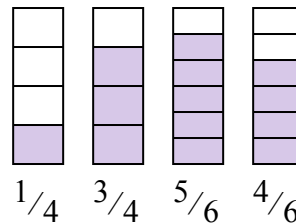
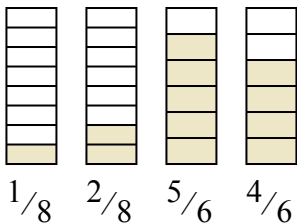
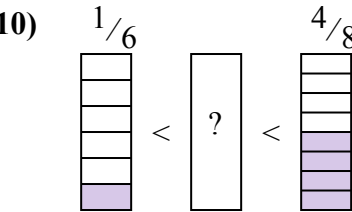
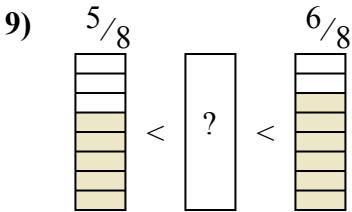
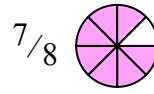
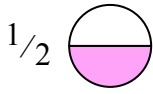
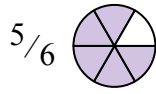
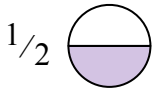
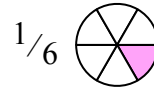
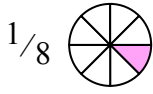
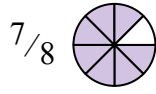
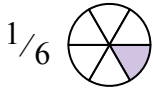
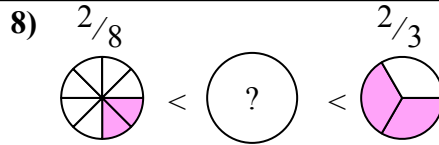
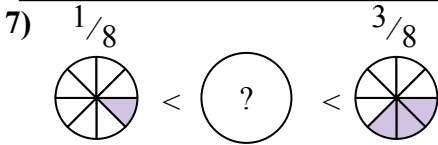
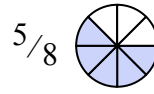
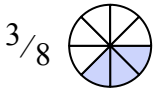
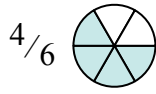
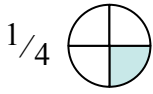
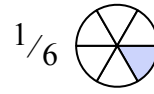
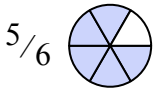
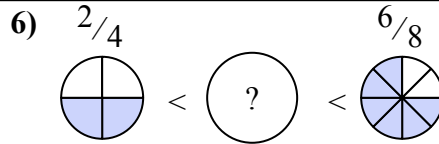
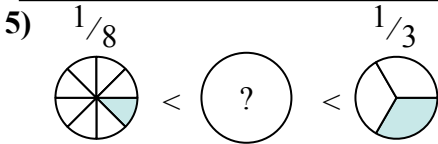
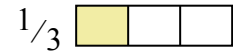
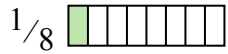

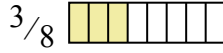
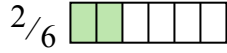
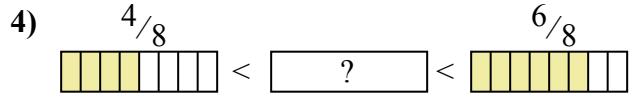
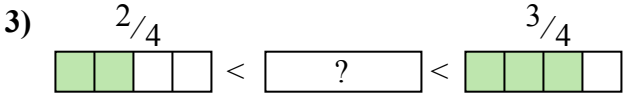
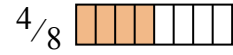
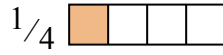
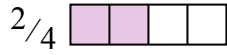
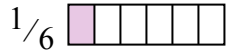
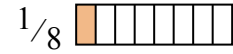
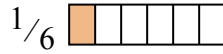
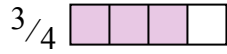
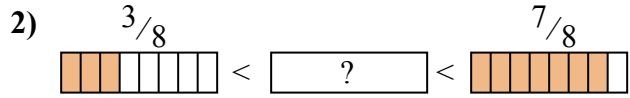
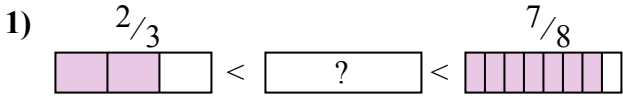
$\frac{1}{4}$        $\frac{3}{4}$        $\frac{5}{6}$        $\frac{4}{6}$

1. \_\_\_\_\_
2. \_\_\_\_\_
3. \_\_\_\_\_
4. \_\_\_\_\_
5. \_\_\_\_\_
6. \_\_\_\_\_
7. \_\_\_\_\_
8. \_\_\_\_\_
9. \_\_\_\_\_
10. \_\_\_\_\_



Déterminez quelle fraction est situ e entre les fraction compar ees.

R ponses



1.  $\frac{3}{4}$
2.  $\frac{4}{8}$
3.  $\frac{5}{8}$
4.  $\frac{2}{3}$
5.  $\frac{1}{4}$
6.  $\frac{5}{8}$
7.  $\frac{1}{6}$
8.  $\frac{1}{2}$
9.  $\frac{4}{6}$
10.  $\frac{1}{4}$



Déterminez quelle fraction est situ e entre les fraction compar ees.

R ponses

1)  $\frac{3}{8}$  <  <  $\frac{4}{6}$    
 $\frac{3}{4}$   $\frac{1}{4}$    
 $\frac{1}{8}$   $\frac{2}{4}$

2)  $\frac{1}{6}$  <  <  $\frac{1}{3}$    
 $\frac{2}{4}$   $\frac{1}{4}$    
 $\frac{6}{8}$   $\frac{2}{3}$

3)  $\frac{2}{8}$  <  <  $\frac{3}{8}$    
 $\frac{3}{4}$   $\frac{2}{6}$    
 $\frac{7}{8}$   $\frac{2}{4}$

4)  $\frac{1}{6}$  <  <  $\frac{2}{6}$    
 $\frac{4}{8}$   $\frac{4}{6}$    
 $\frac{2}{8}$   $\frac{3}{8}$

5)  $\frac{1}{3}$  <  <  $\frac{5}{8}$    
 $\frac{6}{8}$   $\frac{5}{6}$    
 $\frac{2}{4}$   $\frac{1}{8}$

6)  $\frac{2}{6}$  <  <  $\frac{5}{6}$    
 $\frac{7}{8}$   $\frac{2}{8}$    
 $\frac{2}{3}$   $\frac{1}{6}$

7)  $\frac{4}{8}$  <  <  $\frac{4}{6}$    
 $\frac{3}{8}$   $\frac{2}{8}$    
 $\frac{1}{3}$   $\frac{5}{8}$

8)  $\frac{1}{2}$  <  <  $\frac{6}{8}$    
 $\frac{3}{8}$   $\frac{2}{3}$    
 $\frac{2}{8}$   $\frac{1}{6}$

9)  $\frac{2}{6}$  <  <  $\frac{2}{3}$    
 $\frac{6}{8}$   $\frac{1}{4}$   $\frac{1}{2}$   $\frac{1}{8}$

10)  $\frac{5}{8}$  <  <  $\frac{3}{4}$    
 $\frac{3}{6}$   $\frac{2}{8}$   $\frac{7}{8}$   $\frac{2}{3}$

1. \_\_\_\_\_
2. \_\_\_\_\_
3. \_\_\_\_\_
4. \_\_\_\_\_
5. \_\_\_\_\_
6. \_\_\_\_\_
7. \_\_\_\_\_
8. \_\_\_\_\_
9. \_\_\_\_\_
10. \_\_\_\_\_



Déterminez quelle fraction est située entre les fraction comparées.

**Réponses**

1)  $\frac{3}{8}$  <  <  $\frac{4}{6}$    
 $\frac{3}{4}$   $\frac{1}{4}$    
 $\frac{1}{8}$   $\frac{2}{4}$

2)  $\frac{1}{6}$  <  <  $\frac{1}{3}$    
 $\frac{2}{4}$   $\frac{1}{4}$    
 $\frac{6}{8}$   $\frac{2}{3}$

3)  $\frac{2}{8}$  <  <  $\frac{3}{8}$    
 $\frac{3}{4}$   $\frac{2}{6}$    
 $\frac{7}{8}$   $\frac{2}{4}$

4)  $\frac{1}{6}$  <  <  $\frac{2}{6}$    
 $\frac{4}{8}$   $\frac{4}{6}$    
 $\frac{2}{8}$   $\frac{3}{8}$

5)  $\frac{1}{3}$  <  <  $\frac{5}{8}$    
 $\frac{6}{8}$   $\frac{5}{6}$    
 $\frac{2}{4}$   $\frac{1}{8}$

6)  $\frac{2}{6}$  <  <  $\frac{5}{6}$    
 $\frac{7}{8}$   $\frac{2}{8}$    
 $\frac{2}{3}$   $\frac{1}{6}$

7)  $\frac{4}{8}$  <  <  $\frac{4}{6}$    
 $\frac{3}{8}$   $\frac{2}{8}$    
 $\frac{1}{3}$   $\frac{5}{8}$

8)  $\frac{1}{2}$  <  <  $\frac{6}{8}$    
 $\frac{3}{8}$   $\frac{2}{3}$    
 $\frac{2}{8}$   $\frac{1}{6}$

9)  $\frac{2}{6}$  <  <  $\frac{2}{3}$    
 $\frac{6}{8}$   $\frac{1}{4}$   $\frac{1}{2}$   $\frac{1}{8}$

10)  $\frac{5}{8}$  <  <  $\frac{3}{4}$    
 $\frac{3}{6}$   $\frac{2}{8}$   $\frac{7}{8}$   $\frac{2}{3}$

1.  $\frac{2}{4}$
2.  $\frac{1}{4}$
3.  $\frac{2}{6}$
4.  $\frac{2}{8}$
5.  $\frac{2}{4}$
6.  $\frac{2}{3}$
7.  $\frac{5}{8}$
8.  $\frac{2}{3}$
9.  $\frac{1}{2}$
10.  $\frac{2}{3}$



Déterminez quelle fraction est situ e entre les fraction compar ees.

R ponses

1)  $\frac{1}{3}$  <  <  $\frac{5}{8}$

$\frac{4}{6}$        $\frac{5}{6}$

$\frac{2}{8}$        $\frac{4}{8}$

2)  $\frac{3}{6}$  <  <  $\frac{6}{8}$

$\frac{7}{8}$        $\frac{2}{6}$

$\frac{1}{6}$        $\frac{4}{6}$

3)  $\frac{2}{3}$  <  <  $\frac{5}{6}$

$\frac{6}{8}$        $\frac{2}{4}$

$\frac{1}{8}$        $\frac{2}{8}$

4)  $\frac{4}{8}$  <  <  $\frac{3}{4}$

$\frac{1}{4}$        $\frac{5}{8}$

$\frac{7}{8}$        $\frac{5}{6}$

5)  $\frac{1}{6}$  <  <  $\frac{2}{6}$

$\frac{3}{6}$        $\frac{2}{8}$

$\frac{5}{8}$        $\frac{3}{4}$

6)  $\frac{2}{8}$  <  <  $\frac{6}{8}$

$\frac{5}{6}$        $\frac{4}{6}$

$\frac{1}{8}$        $\frac{1}{6}$

7)  $\frac{4}{6}$  <  <  $\frac{5}{6}$

$\frac{3}{4}$        $\frac{1}{8}$

$\frac{1}{3}$        $\frac{2}{4}$

8)  $\frac{2}{4}$  <  <  $\frac{2}{3}$

$\frac{5}{8}$        $\frac{1}{4}$

$\frac{1}{3}$        $\frac{6}{8}$

9)  $\frac{1}{6}$  <  <  $\frac{3}{8}$

$\frac{3}{4}$        $\frac{4}{8}$        $\frac{1}{8}$        $\frac{2}{6}$

10)  $\frac{3}{8}$  <  <  $\frac{5}{8}$

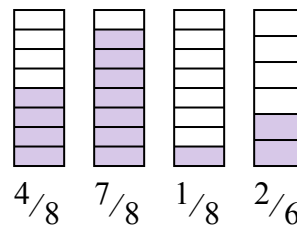
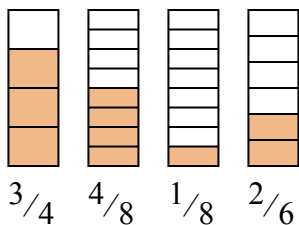
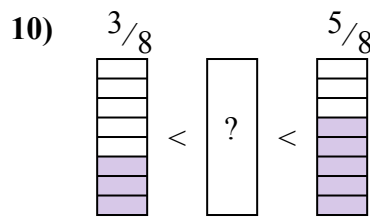
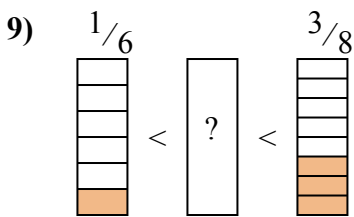
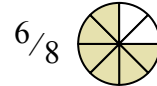
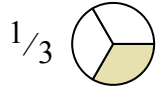
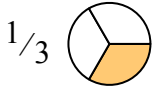
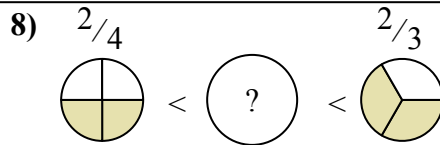
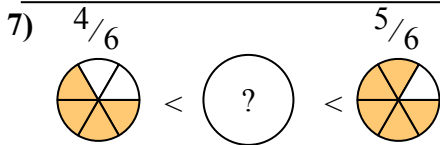
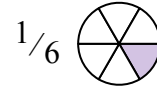
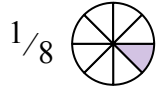
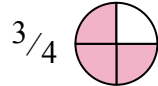
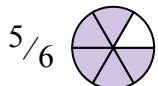
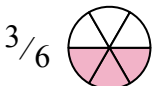
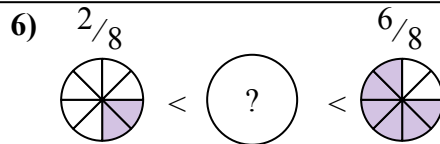
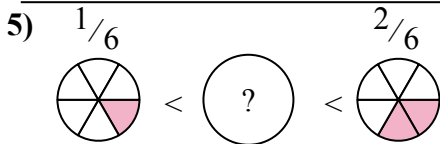
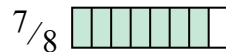
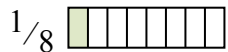
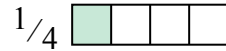
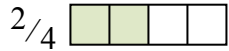
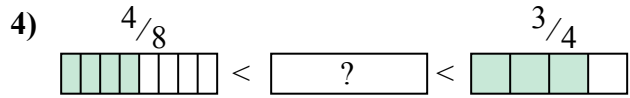

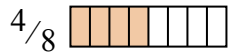
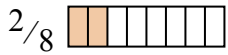
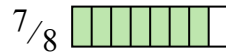
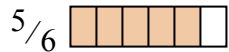
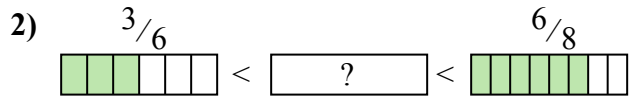
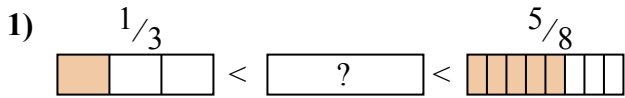
$\frac{4}{8}$        $\frac{7}{8}$        $\frac{1}{8}$        $\frac{2}{6}$

1. \_\_\_\_\_
2. \_\_\_\_\_
3. \_\_\_\_\_
4. \_\_\_\_\_
5. \_\_\_\_\_
6. \_\_\_\_\_
7. \_\_\_\_\_
8. \_\_\_\_\_
9. \_\_\_\_\_
10. \_\_\_\_\_



Déterminez quelle fraction est située entre les fraction comparées.

Réponses

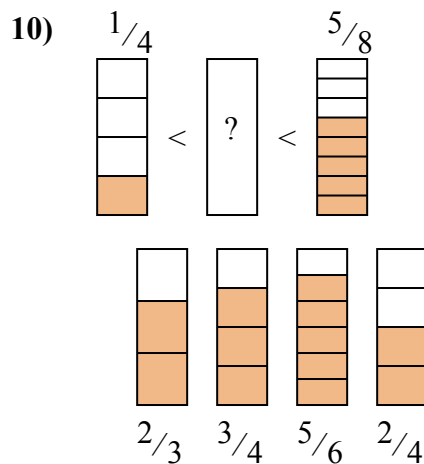
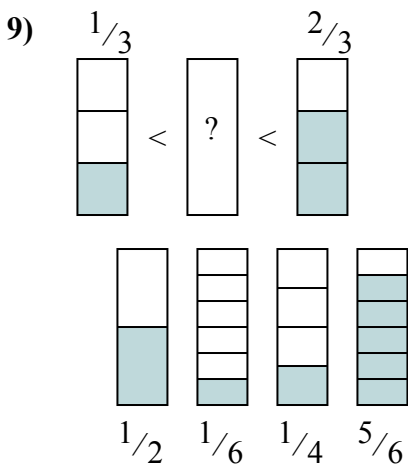
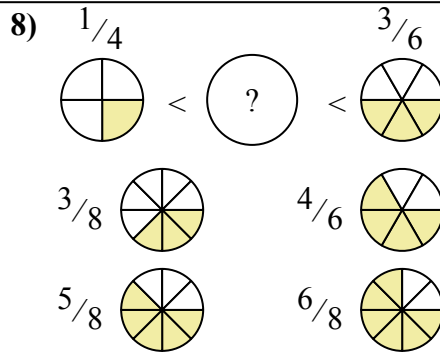
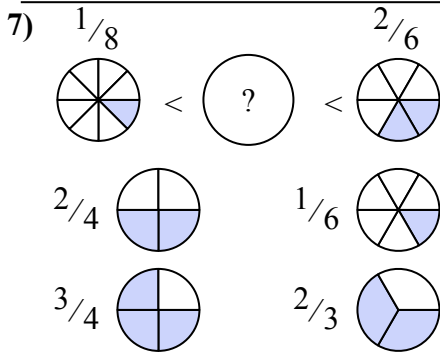
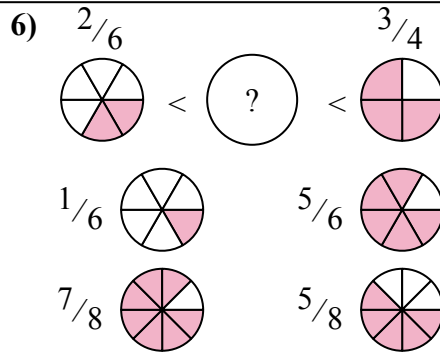
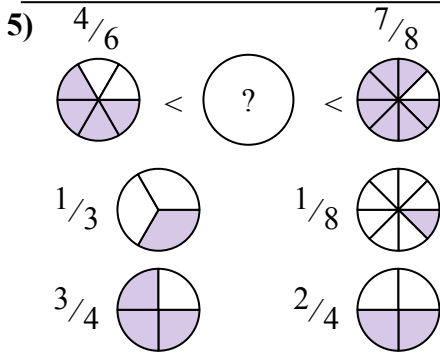
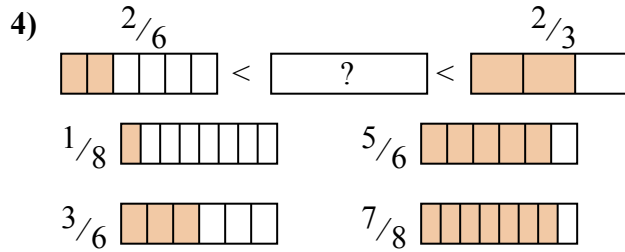
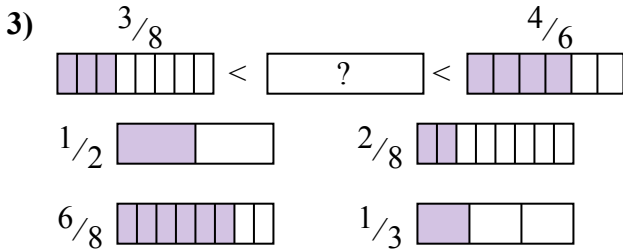
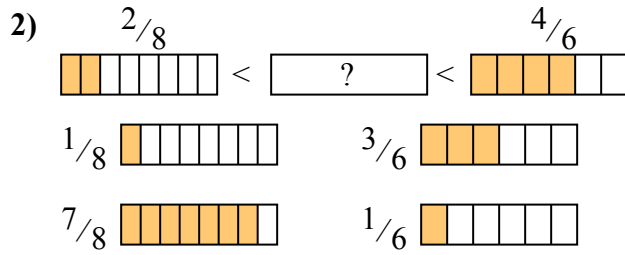
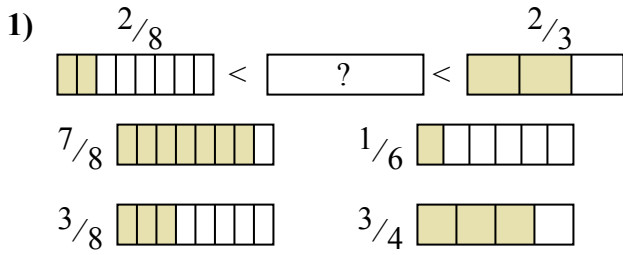


1.  $\frac{4}{8}$
2.  $\frac{4}{6}$
3.  $\frac{6}{8}$
4.  $\frac{5}{8}$
5.  $\frac{2}{8}$
6.  $\frac{4}{6}$
7.  $\frac{3}{4}$
8.  $\frac{5}{8}$
9.  $\frac{2}{6}$
10.  $\frac{4}{8}$



Déterminez quelle fraction est situ e entre les fraction compar ees.

R ponses

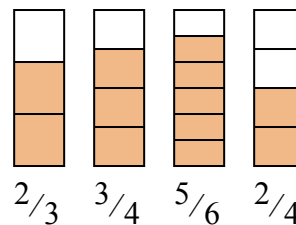
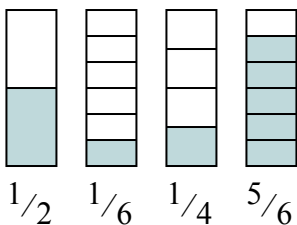
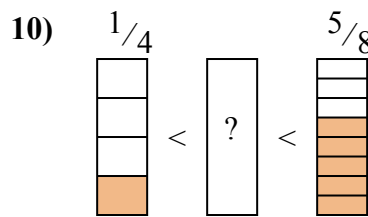
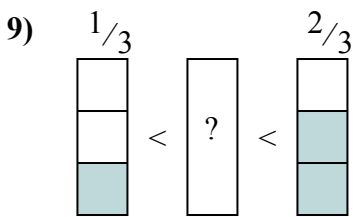
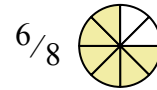
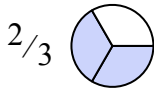
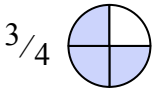
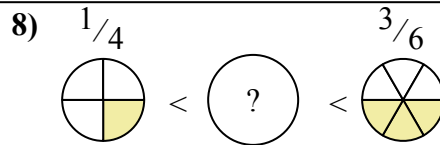
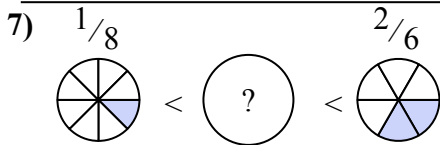
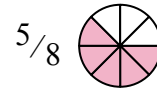
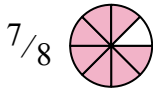
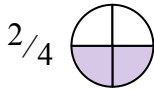
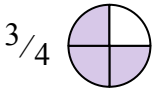
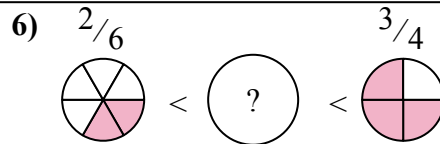
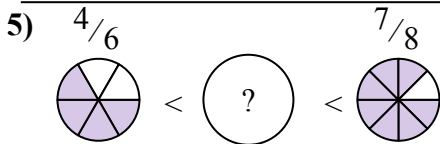
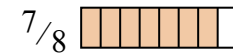
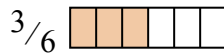
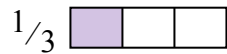
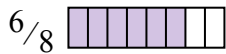
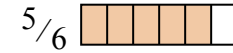
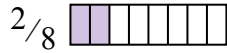
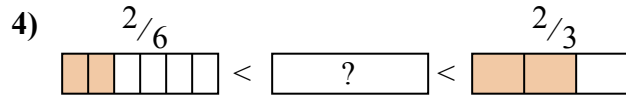
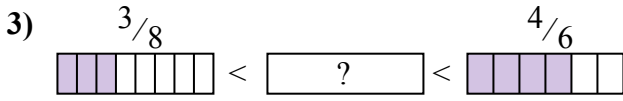
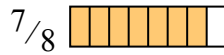
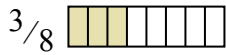
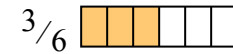
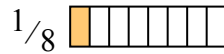
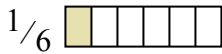
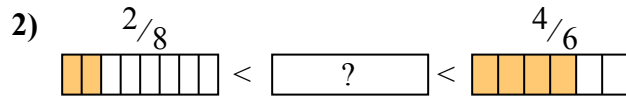
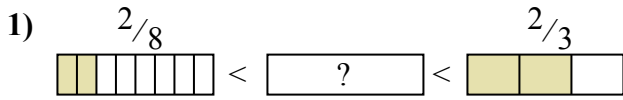


1. \_\_\_\_\_
2. \_\_\_\_\_
3. \_\_\_\_\_
4. \_\_\_\_\_
5. \_\_\_\_\_
6. \_\_\_\_\_
7. \_\_\_\_\_
8. \_\_\_\_\_
9. \_\_\_\_\_
10. \_\_\_\_\_



Déterminez quelle fraction est située entre les fraction comparées.

**Réponses**



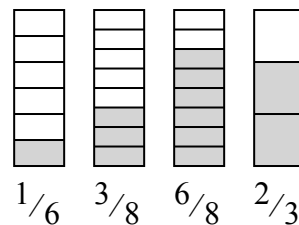
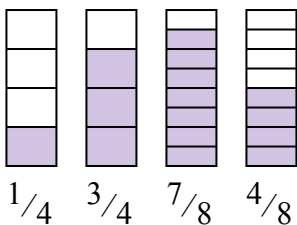
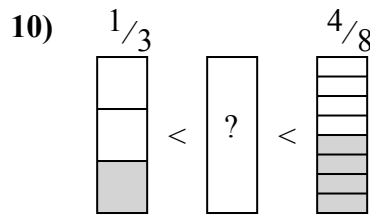
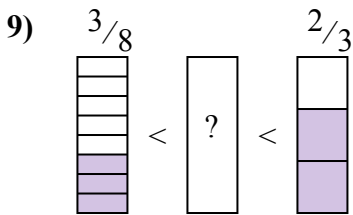
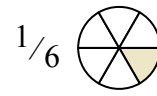
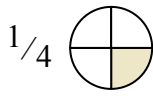
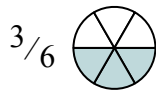
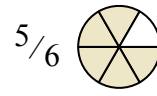
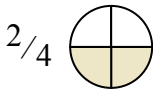
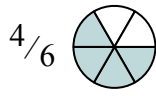
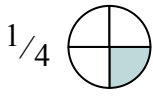
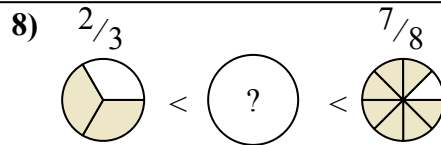
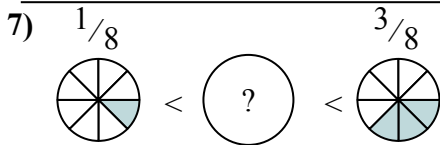
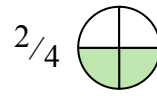
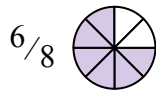
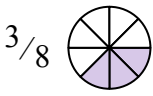
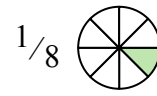
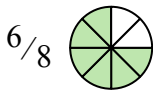
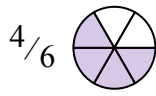
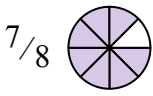
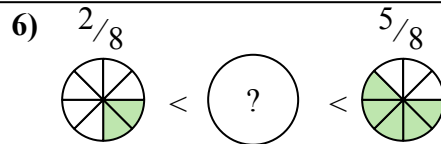
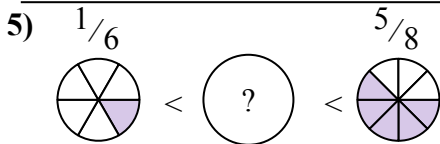
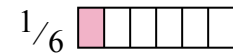
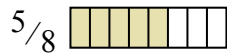
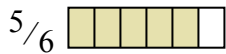
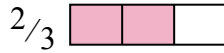
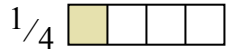
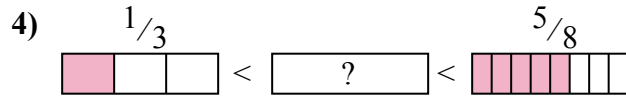
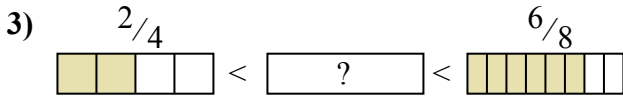
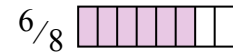
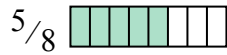
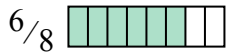
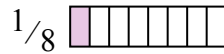
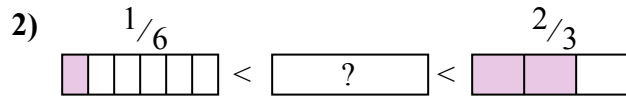
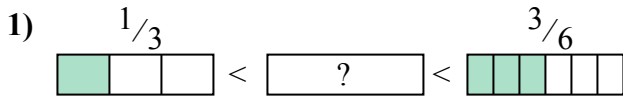
1.  $\frac{3}{8}$
2.  $\frac{3}{6}$
3.  $\frac{1}{2}$
4.  $\frac{3}{6}$
5.  $\frac{3}{4}$
6.  $\frac{5}{8}$
7.  $\frac{1}{6}$
8.  $\frac{3}{8}$
9.  $\frac{1}{2}$
10.  $\frac{2}{4}$





Déterminez quelle fraction est situ e entre les fraction compar ees.

**R ponses**

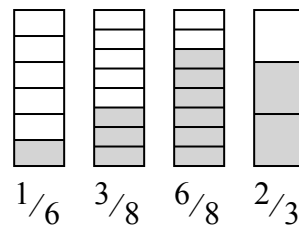
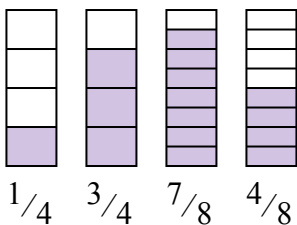
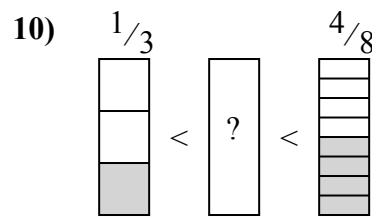
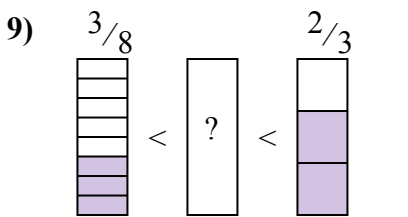
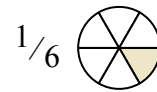
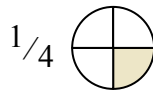
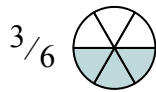
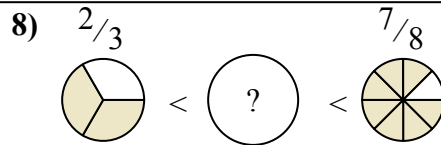
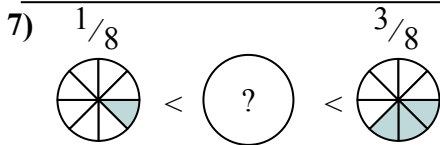
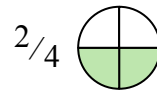
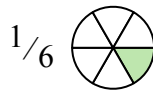
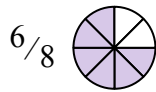
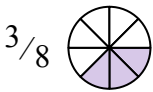
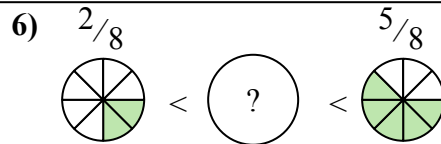
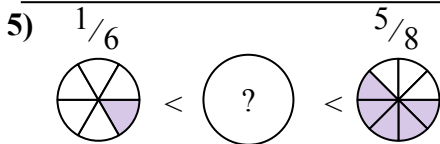
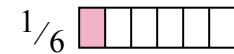
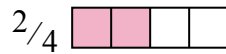
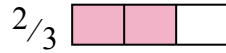
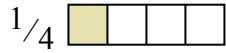
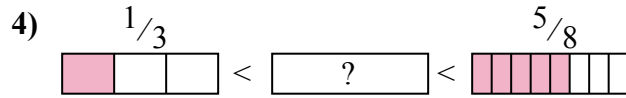
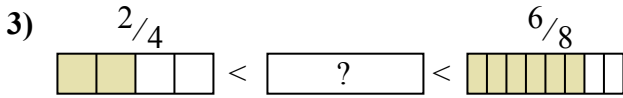
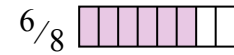
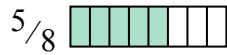
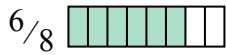
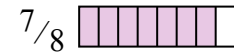
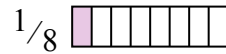
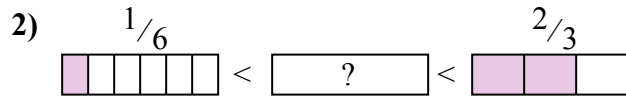
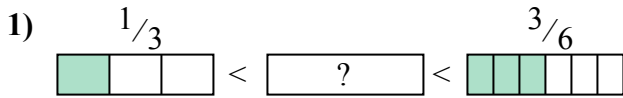


1. \_\_\_\_\_
2. \_\_\_\_\_
3. \_\_\_\_\_
4. \_\_\_\_\_
5. \_\_\_\_\_
6. \_\_\_\_\_
7. \_\_\_\_\_
8. \_\_\_\_\_
9. \_\_\_\_\_
10. \_\_\_\_\_



Déterminez quelle fraction est située entre les fraction comparées.

Réponses



1.  $\frac{3}{8}$
2.  $\frac{1}{2}$
3.  $\frac{5}{8}$
4.  $\frac{2}{4}$
5.  $\frac{3}{8}$
6.  $\frac{2}{4}$
7.  $\frac{1}{4}$
8.  $\frac{5}{6}$
9.  $\frac{4}{8}$
10.  $\frac{3}{8}$



Déterminez quelle fraction est situ e entre les fraction compar es.

R ponses

1)  $\frac{4}{6}$  <  <  $\frac{7}{8}$

$\frac{1}{6}$        $\frac{1}{8}$

$\frac{6}{8}$        $\frac{2}{4}$

2)  $\frac{2}{6}$  <  <  $\frac{5}{6}$

$\frac{1}{4}$        $\frac{1}{8}$

$\frac{3}{6}$        $\frac{7}{8}$

3)  $\frac{5}{8}$  <  <  $\frac{7}{8}$

$\frac{6}{8}$        $\frac{2}{4}$

$\frac{2}{6}$        $\frac{1}{4}$

4)  $\frac{5}{8}$  <  <  $\frac{5}{6}$

$\frac{3}{8}$        $\frac{2}{4}$

$\frac{1}{6}$        $\frac{6}{8}$

5)  $\frac{1}{4}$  <  <  $\frac{3}{8}$

$\frac{1}{8}$        $\frac{2}{3}$

$\frac{3}{6}$        $\frac{2}{6}$

6)  $\frac{4}{8}$  <  <  $\frac{6}{8}$

$\frac{5}{8}$        $\frac{5}{6}$

$\frac{3}{8}$        $\frac{2}{6}$

7)  $\frac{5}{8}$  <  <  $\frac{6}{8}$

$\frac{1}{2}$        $\frac{3}{8}$

$\frac{1}{8}$        $\frac{4}{6}$

8)  $\frac{5}{8}$  <  <  $\frac{5}{6}$

$\frac{3}{4}$        $\frac{2}{8}$

$\frac{3}{8}$        $\frac{4}{8}$

9)  $\frac{2}{6}$  <  <  $\frac{4}{6}$

$\frac{4}{8}$        $\frac{1}{8}$        $\frac{7}{8}$        $\frac{1}{4}$

10)  $\frac{2}{8}$  <  <  $\frac{1}{2}$

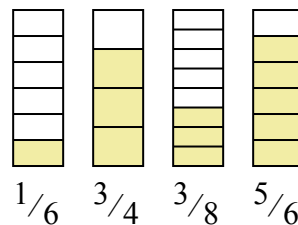
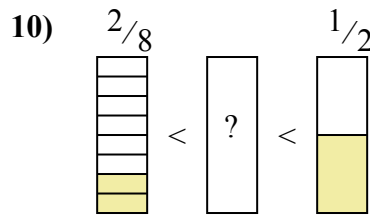
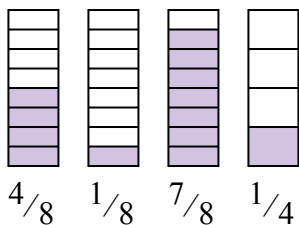
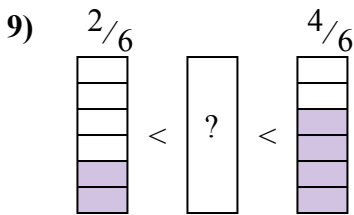
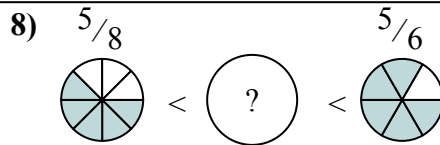
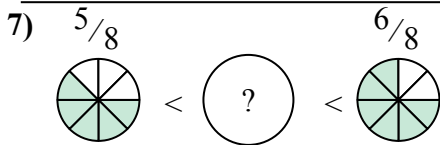
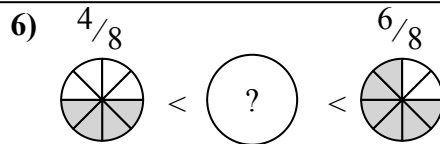
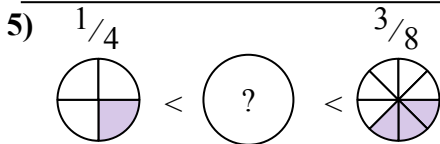

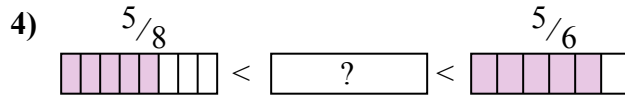

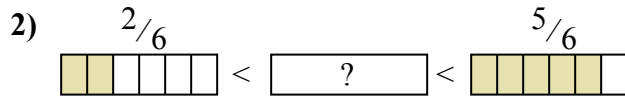

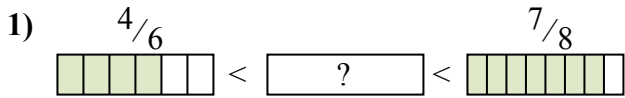
$\frac{1}{6}$        $\frac{3}{4}$        $\frac{3}{8}$        $\frac{5}{6}$

1. \_\_\_\_\_
2. \_\_\_\_\_
3. \_\_\_\_\_
4. \_\_\_\_\_
5. \_\_\_\_\_
6. \_\_\_\_\_
7. \_\_\_\_\_
8. \_\_\_\_\_
9. \_\_\_\_\_
10. \_\_\_\_\_



Déterminez quelle fraction est située entre les fraction comparées.

Réponses

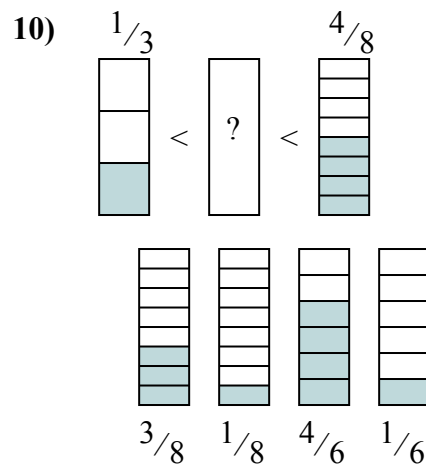
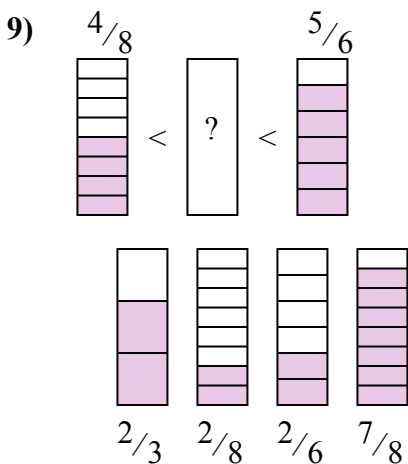
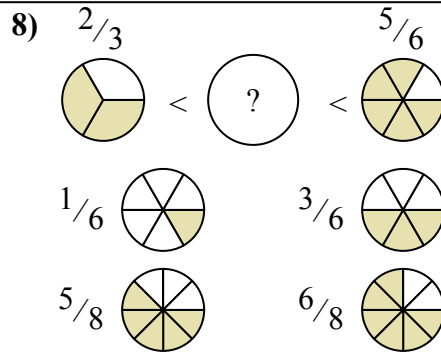
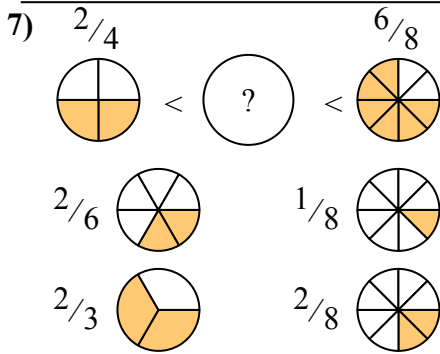
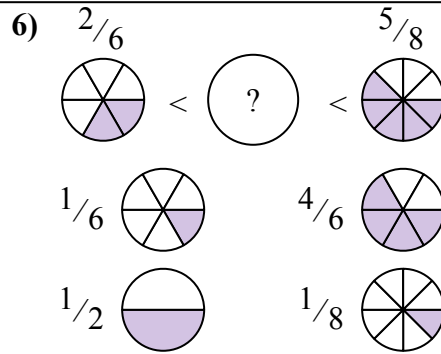
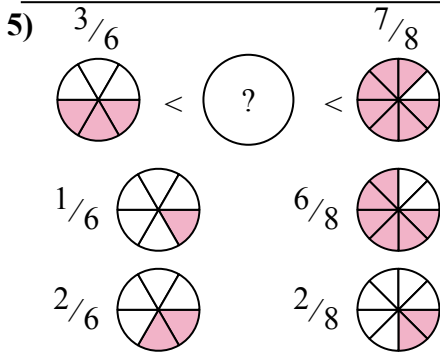
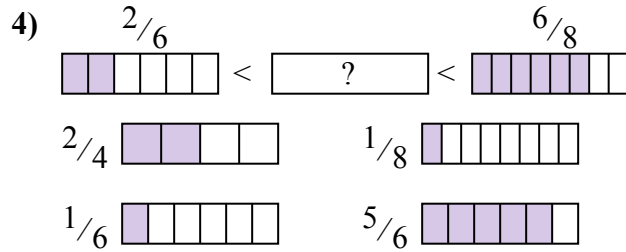
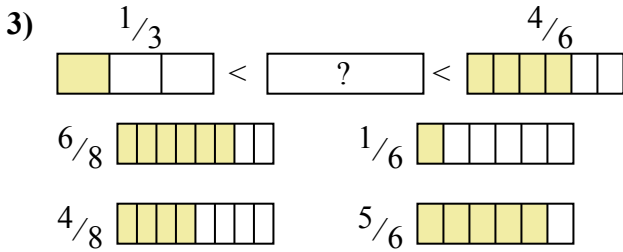
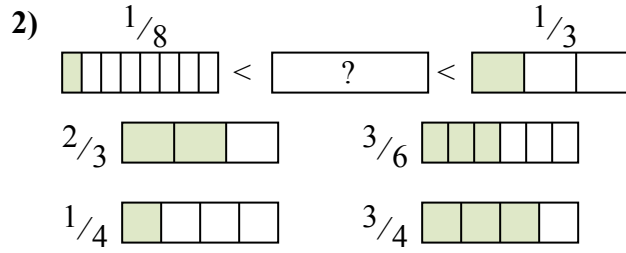
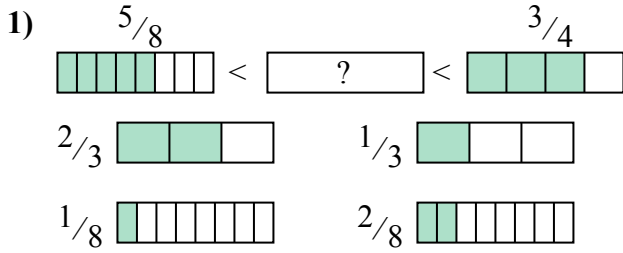


1.  $\frac{6}{8}$
2.  $\frac{3}{6}$
3.  $\frac{6}{8}$
4.  $\frac{6}{8}$
5.  $\frac{2}{6}$
6.  $\frac{5}{8}$
7.  $\frac{4}{6}$
8.  $\frac{3}{4}$
9.  $\frac{4}{8}$
10.  $\frac{3}{8}$



Déterminez quelle fraction est situ e entre les fraction compar ees.

R ponses

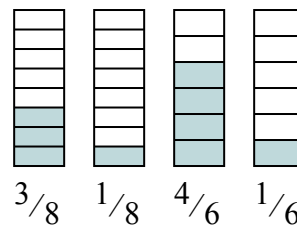
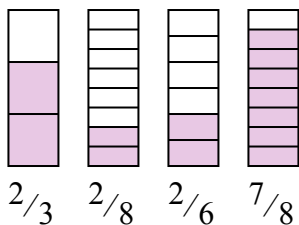
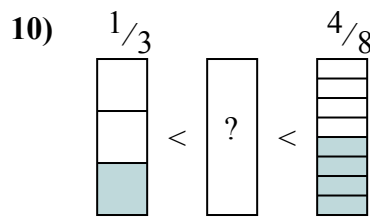
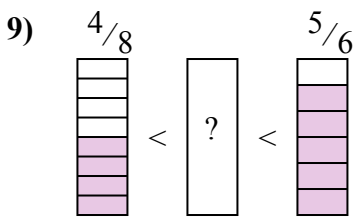
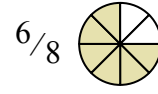
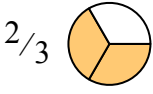
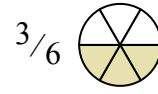
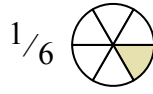
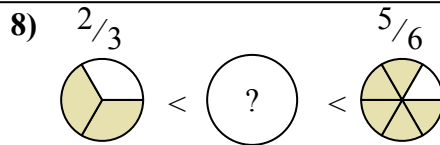
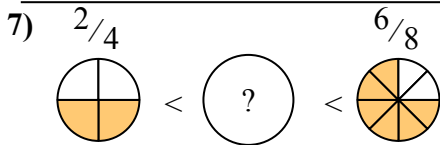
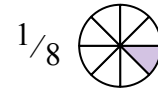
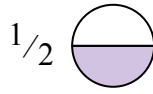
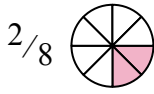
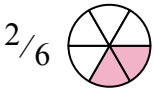
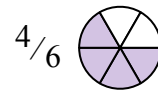
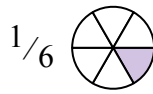
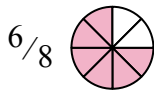
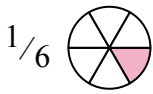
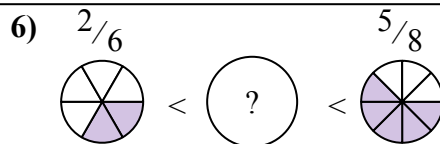
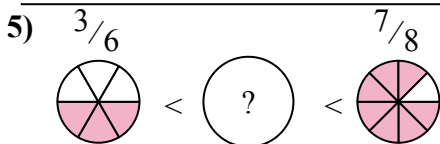
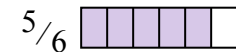
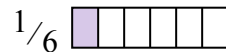
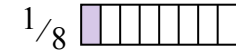
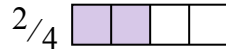
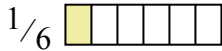
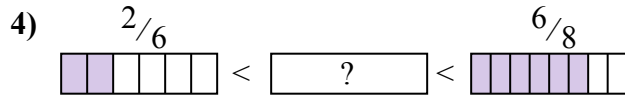
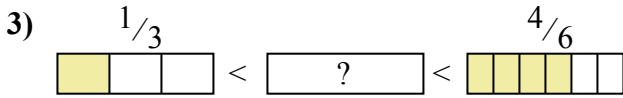
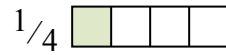
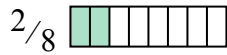
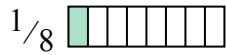
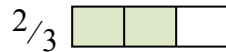
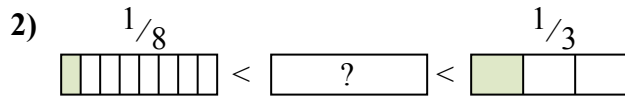
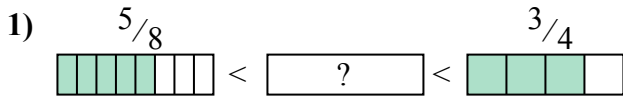


1. \_\_\_\_\_
2. \_\_\_\_\_
3. \_\_\_\_\_
4. \_\_\_\_\_
5. \_\_\_\_\_
6. \_\_\_\_\_
7. \_\_\_\_\_
8. \_\_\_\_\_
9. \_\_\_\_\_
10. \_\_\_\_\_



Déterminez quelle fraction est située entre les fraction comparées.

**Réponses**

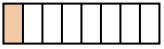



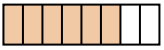
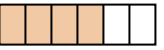
1.  $\frac{2}{3}$
2.  $\frac{1}{4}$
3.  $\frac{4}{8}$
4.  $\frac{2}{4}$
5.  $\frac{6}{8}$
6.  $\frac{1}{2}$
7.  $\frac{2}{3}$
8.  $\frac{6}{8}$
9.  $\frac{2}{3}$
10.  $\frac{3}{8}$







Déterminez quelle fraction est située entre les fraction comparées.

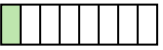
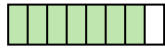
Réponses



1)  $\frac{1}{8}$   <  <  $\frac{1}{3}$  

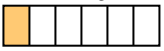

$\frac{6}{8}$    $\frac{4}{6}$  



$\frac{1}{4}$    $\frac{4}{8}$  

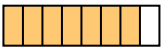

2)  $\frac{3}{8}$   <  <  $\frac{2}{3}$  



$\frac{1}{8}$    $\frac{7}{8}$  


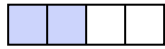
$\frac{4}{8}$    $\frac{1}{3}$  

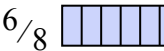
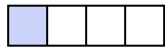
3)  $\frac{1}{6}$   <  <  $\frac{3}{8}$  


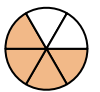
$\frac{1}{8}$    $\frac{2}{4}$  


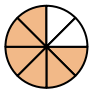
$\frac{7}{8}$    $\frac{1}{4}$  



4)  $\frac{2}{3}$   <  <  $\frac{5}{6}$  



$\frac{1}{3}$    $\frac{2}{4}$  



$\frac{6}{8}$    $\frac{1}{4}$  



5)  $\frac{3}{6}$   <  <  $\frac{4}{6}$  



$\frac{2}{8}$    $\frac{6}{8}$  


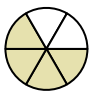
$\frac{5}{8}$    $\frac{3}{8}$  



6)  $\frac{2}{8}$   <  <  $\frac{5}{8}$  



$\frac{4}{8}$    $\frac{6}{8}$  



$\frac{1}{8}$    $\frac{2}{3}$  



7)  $\frac{1}{8}$   <  <  $\frac{5}{8}$  



$\frac{5}{6}$    $\frac{4}{6}$  





$\frac{6}{8}$    $\frac{4}{8}$  


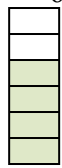
8)  $\frac{5}{8}$   <  <  $\frac{6}{8}$  





$\frac{1}{8}$    $\frac{1}{2}$  

$\frac{1}{6}$    $\frac{2}{3}$  

9)  $\frac{3}{8}$   <  <  $\frac{6}{8}$  

$\frac{1}{8}$    $\frac{3}{6}$    $\frac{1}{3}$    $\frac{7}{8}$  

10)  $\frac{2}{8}$   <  <  $\frac{4}{6}$  

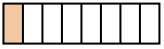

$\frac{7}{8}$    $\frac{1}{3}$    $\frac{5}{6}$    $\frac{6}{8}$  

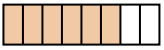
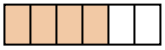
1. \_\_\_\_\_
2. \_\_\_\_\_
3. \_\_\_\_\_
4. \_\_\_\_\_
5. \_\_\_\_\_
6. \_\_\_\_\_
7. \_\_\_\_\_
8. \_\_\_\_\_
9. \_\_\_\_\_
10. \_\_\_\_\_







Déterminez quelle fraction est située entre les fraction comparées.


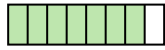
**Réponses**



1)  $\frac{1}{8}$   <  <  $\frac{1}{3}$  

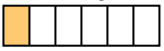

$\frac{6}{8}$    $\frac{4}{6}$  



$\frac{1}{4}$    $\frac{4}{8}$  

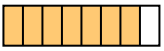
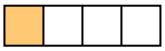
2)  $\frac{3}{8}$   <  <  $\frac{2}{3}$  



$\frac{1}{8}$    $\frac{7}{8}$  


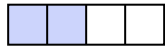
$\frac{4}{8}$    $\frac{1}{3}$  

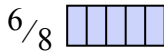
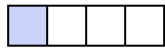
3)  $\frac{1}{6}$   <  <  $\frac{3}{8}$  



$\frac{1}{8}$    $\frac{2}{4}$  



$\frac{7}{8}$    $\frac{1}{4}$  



4)  $\frac{2}{3}$   <  <  $\frac{5}{6}$  



$\frac{1}{3}$    $\frac{2}{4}$  



$\frac{6}{8}$    $\frac{1}{4}$  



5)  $\frac{3}{6}$   <  <  $\frac{4}{6}$  



$\frac{2}{8}$    $\frac{6}{8}$  



$\frac{5}{8}$    $\frac{3}{8}$  



6)  $\frac{2}{8}$   <  <  $\frac{5}{8}$  



$\frac{4}{8}$    $\frac{6}{8}$  



$\frac{1}{8}$    $\frac{2}{3}$  



7)  $\frac{1}{8}$   <  <  $\frac{5}{8}$  



$\frac{5}{6}$    $\frac{4}{6}$  





$\frac{6}{8}$    $\frac{4}{8}$  


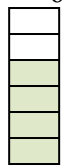
8)  $\frac{5}{8}$   <  <  $\frac{6}{8}$  





$\frac{1}{8}$    $\frac{1}{2}$  

$\frac{1}{6}$    $\frac{2}{3}$  

9)  $\frac{3}{8}$   <  <  $\frac{6}{8}$  

$\frac{1}{8}$    $\frac{3}{6}$    $\frac{1}{3}$    $\frac{7}{8}$  

10)  $\frac{2}{8}$   <  <  $\frac{4}{6}$  

$\frac{7}{8}$    $\frac{1}{3}$    $\frac{5}{6}$    $\frac{6}{8}$  

1.  $\frac{1}{4}$
2.  $\frac{4}{8}$
3.  $\frac{1}{4}$
4.  $\frac{6}{8}$
5.  $\frac{5}{8}$
6.  $\frac{4}{8}$
7.  $\frac{4}{8}$
8.  $\frac{2}{3}$
9.  $\frac{3}{6}$
10.  $\frac{1}{3}$





Déterminez quelle fraction est situ e entre les fraction compar ees.

R ponses

1)  $\frac{4}{8}$  <  <  $\frac{5}{6}$

$\frac{1}{4}$        $\frac{2}{6}$

$\frac{3}{4}$        $\frac{3}{8}$

2)  $\frac{1}{8}$  <  <  $\frac{1}{3}$

$\frac{5}{6}$        $\frac{4}{6}$

$\frac{1}{4}$        $\frac{3}{6}$

3)  $\frac{1}{4}$  <  <  $\frac{2}{3}$

$\frac{7}{8}$        $\frac{5}{6}$

$\frac{6}{8}$        $\frac{2}{6}$

4)  $\frac{5}{8}$  <  <  $\frac{3}{4}$

$\frac{2}{6}$        $\frac{3}{6}$

$\frac{4}{6}$        $\frac{3}{8}$

5)  $\frac{5}{8}$  <  <  $\frac{6}{8}$

$\frac{2}{3}$        $\frac{3}{6}$

$\frac{2}{8}$        $\frac{1}{6}$

6)  $\frac{2}{3}$  <  <  $\frac{7}{8}$

$\frac{1}{3}$        $\frac{3}{8}$

$\frac{5}{8}$        $\frac{6}{8}$

7)  $\frac{1}{8}$  <  <  $\frac{2}{6}$

$\frac{3}{8}$        $\frac{1}{2}$

$\frac{5}{6}$        $\frac{1}{6}$

8)  $\frac{1}{3}$  <  <  $\frac{2}{3}$

$\frac{6}{8}$        $\frac{5}{6}$

$\frac{2}{4}$        $\frac{1}{4}$

9)  $\frac{4}{8}$  <  <  $\frac{6}{8}$

$\frac{2}{6}$        $\frac{1}{8}$

$\frac{5}{6}$        $\frac{4}{6}$

10)  $\frac{2}{4}$  <  <  $\frac{3}{4}$

$\frac{3}{8}$        $\frac{4}{6}$

$\frac{2}{8}$        $\frac{2}{6}$

1. \_\_\_\_\_
2. \_\_\_\_\_
3. \_\_\_\_\_
4. \_\_\_\_\_
5. \_\_\_\_\_
6. \_\_\_\_\_
7. \_\_\_\_\_
8. \_\_\_\_\_
9. \_\_\_\_\_
10. \_\_\_\_\_



Déterminez quelle fraction est située entre les fraction comparées.

1)  $\frac{4}{8}$  <  <  $\frac{5}{6}$    
 $\frac{1}{4}$        $\frac{2}{6}$    
 $\frac{3}{4}$        $\frac{3}{8}$

2)  $\frac{1}{8}$  <  <  $\frac{1}{3}$    
 $\frac{5}{6}$        $\frac{4}{6}$    
 $\frac{1}{4}$        $\frac{3}{6}$

3)  $\frac{1}{4}$  <  <  $\frac{2}{3}$    
 $\frac{7}{8}$        $\frac{5}{6}$    
 $\frac{6}{8}$        $\frac{2}{6}$

4)  $\frac{5}{8}$  <  <  $\frac{3}{4}$    
 $\frac{2}{6}$        $\frac{3}{6}$    
 $\frac{4}{6}$        $\frac{3}{8}$

5)  $\frac{5}{8}$  <  <  $\frac{6}{8}$    
 $\frac{2}{3}$        $\frac{3}{6}$    
 $\frac{2}{8}$        $\frac{1}{6}$

6)  $\frac{2}{3}$  <  <  $\frac{7}{8}$    
 $\frac{1}{3}$        $\frac{3}{8}$    
 $\frac{5}{8}$        $\frac{6}{8}$

7)  $\frac{1}{8}$  <  <  $\frac{2}{6}$    
 $\frac{3}{8}$        $\frac{1}{2}$    
 $\frac{5}{6}$        $\frac{1}{6}$

8)  $\frac{1}{3}$  <  <  $\frac{2}{3}$    
 $\frac{6}{8}$        $\frac{5}{6}$    
 $\frac{2}{4}$        $\frac{1}{4}$

9)  $\frac{4}{8}$  <  <  $\frac{6}{8}$    
       $\frac{1}{8}$        $\frac{5}{6}$        $\frac{4}{6}$

10)  $\frac{2}{4}$  <  <  $\frac{3}{4}$    
       $\frac{3}{8}$        $\frac{4}{6}$        $\frac{2}{8}$        $\frac{2}{6}$

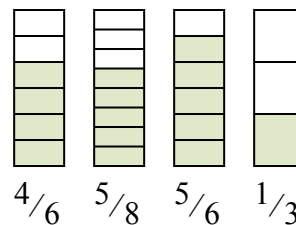
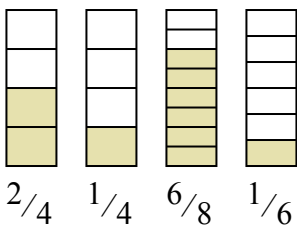
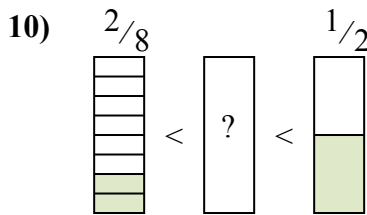
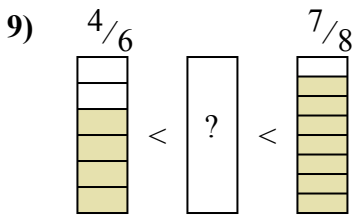
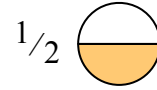
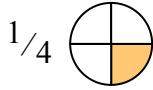
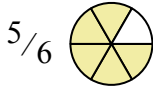
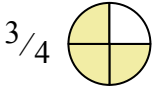
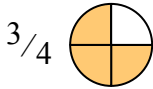
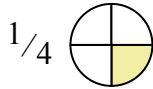
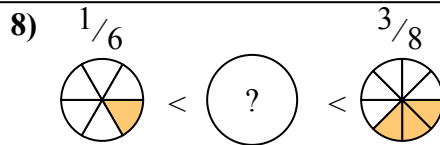
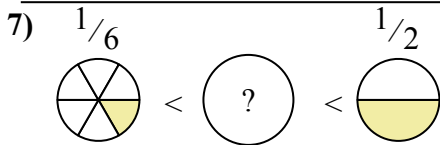
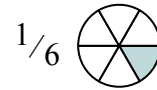
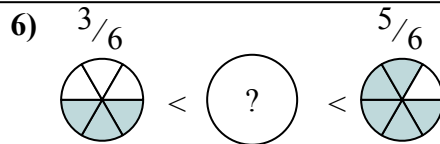
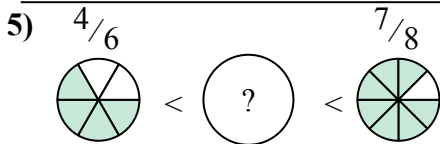
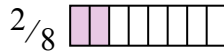
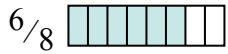
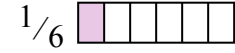
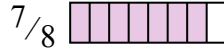
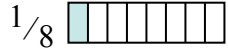
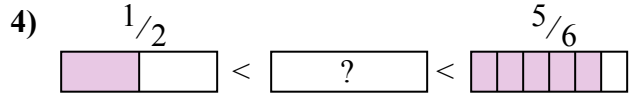
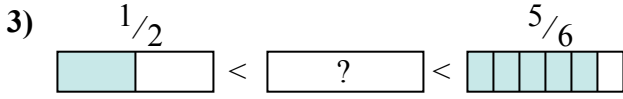
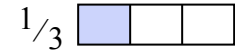
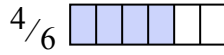
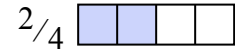
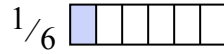
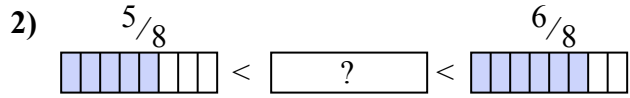
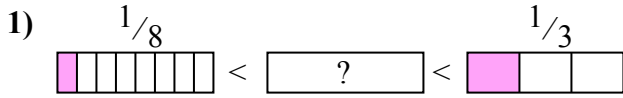
**Réponses**

1.  $\frac{3}{4}$
2.  $\frac{1}{4}$
3.  $\frac{2}{6}$
4.  $\frac{4}{6}$
5.  $\frac{2}{3}$
6.  $\frac{6}{8}$
7.  $\frac{1}{6}$
8.  $\frac{2}{4}$
9.  $\frac{4}{6}$
10.  $\frac{4}{6}$



Déterminez quelle fraction est situ e entre les fraction compar ees.

R ponses

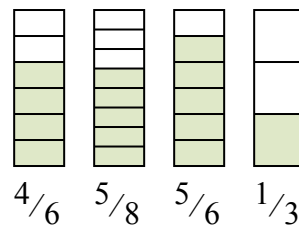
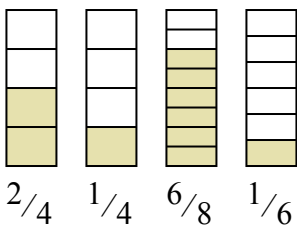
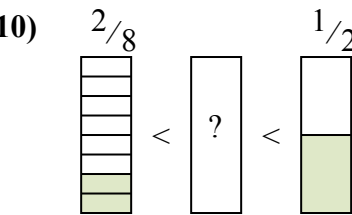
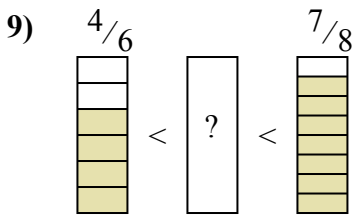
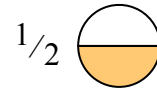
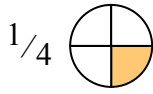
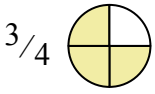
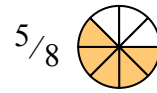
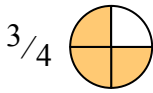
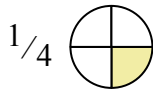
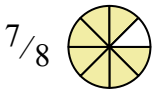
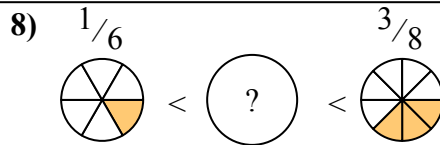
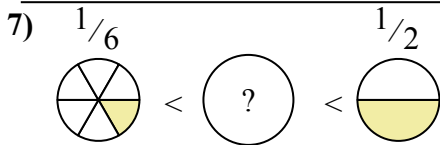
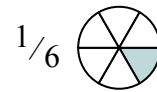
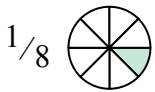
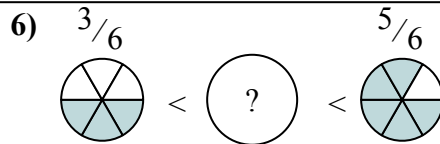
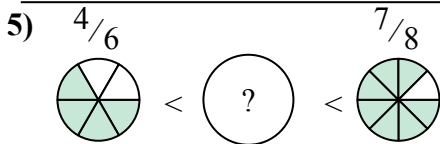
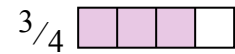
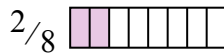
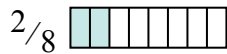
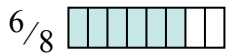
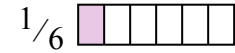
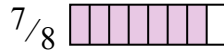
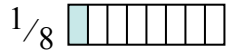
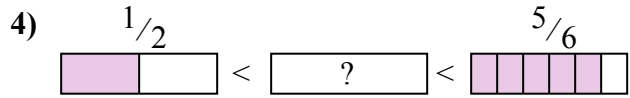
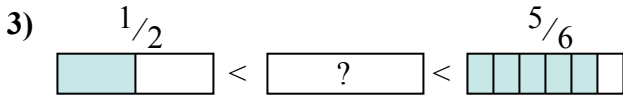
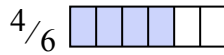
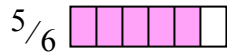
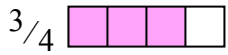
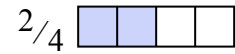
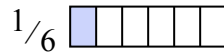
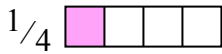
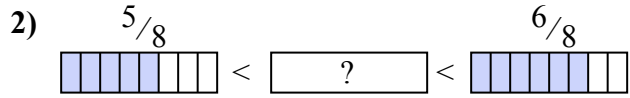
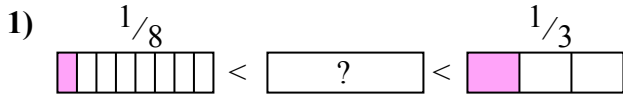


1. \_\_\_\_\_
2. \_\_\_\_\_
3. \_\_\_\_\_
4. \_\_\_\_\_
5. \_\_\_\_\_
6. \_\_\_\_\_
7. \_\_\_\_\_
8. \_\_\_\_\_
9. \_\_\_\_\_
10. \_\_\_\_\_



Déterminez quelle fraction est située entre les fraction comparées.

Réponses



1.  $\frac{1}{4}$
2.  $\frac{4}{6}$
3.  $\frac{6}{8}$
4.  $\frac{3}{4}$
5.  $\frac{6}{8}$
6.  $\frac{2}{3}$
7.  $\frac{1}{4}$
8.  $\frac{1}{4}$
9.  $\frac{6}{8}$
10.  $\frac{1}{3}$