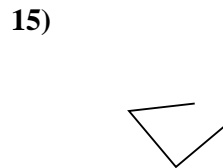
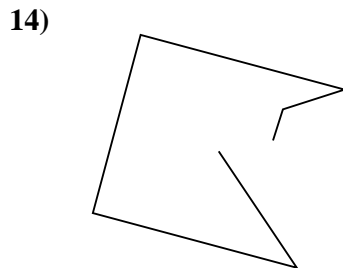
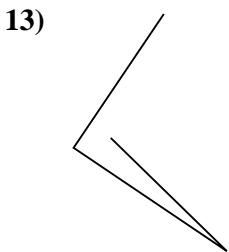
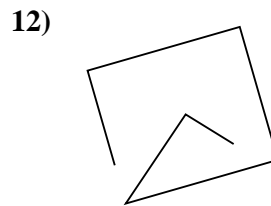
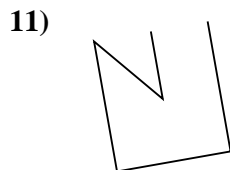
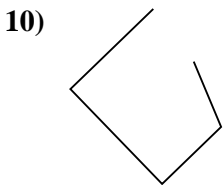
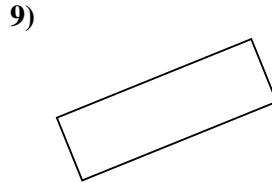
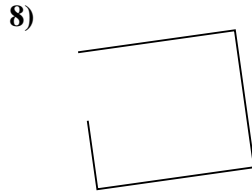
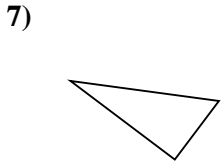
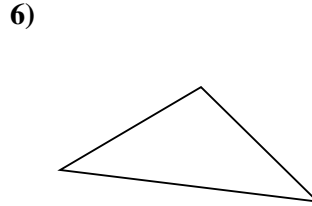
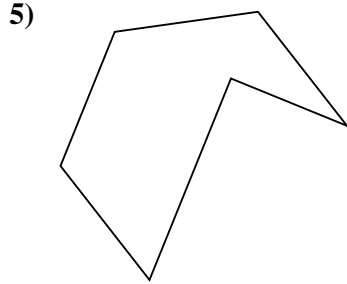
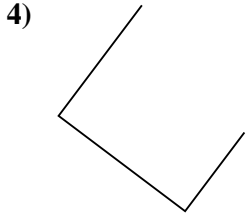
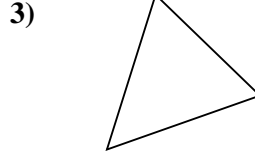
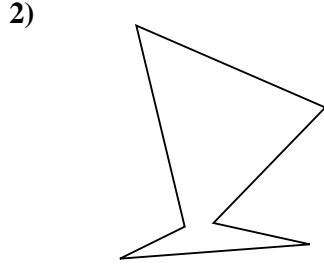
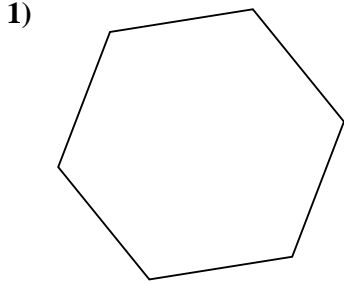




Determinez si la figure montrée est un 'Triangle', 'Carrée', 'Rectangle', 'Hexagone' or 'Autre'.

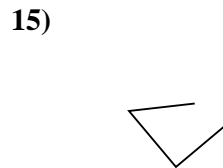
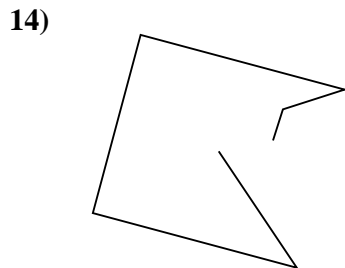
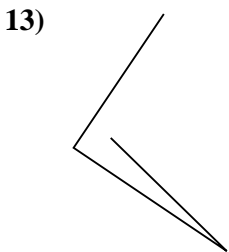
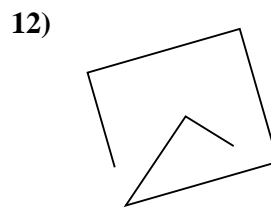
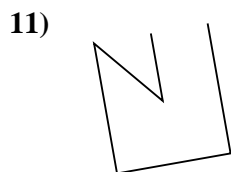
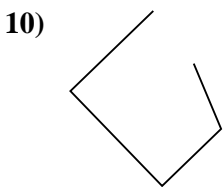
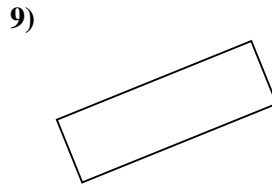
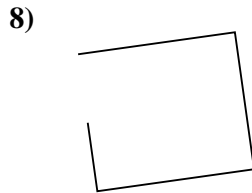
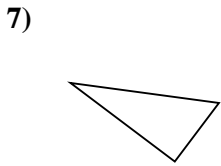
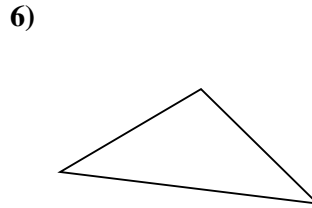
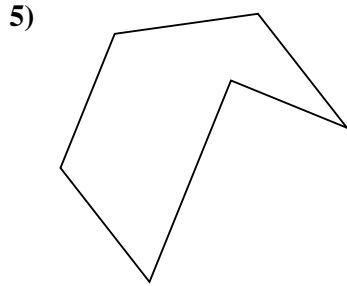
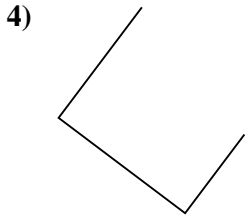
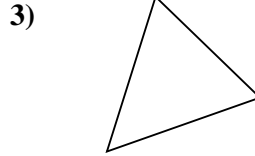
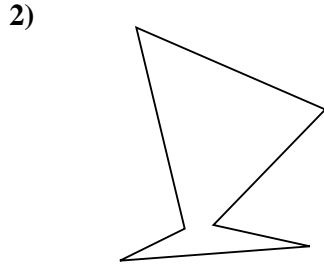
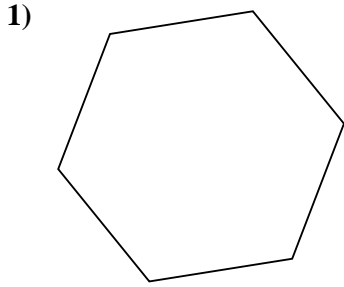


Réponses

- 1. _____
- 2. _____
- 3. _____
- 4. _____
- 5. _____
- 6. _____
- 7. _____
- 8. _____
- 9. _____
- 10. _____
- 11. _____
- 12. _____
- 13. _____
- 14. _____
- 15. _____



Determinez si la figure montrée est un 'Triangle', 'Carrée', 'Rectangle', 'Hexagone' or 'Autre'.



Réponses

1. Hexagone

2. Hexagone

3. Triangle

4. Autre

5. Hexagone

6. Triangle

7. Triangle

8. Autre

9. Rectangle

10. Autre

11. Autre

12. Autre

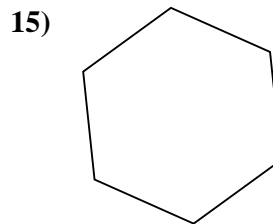
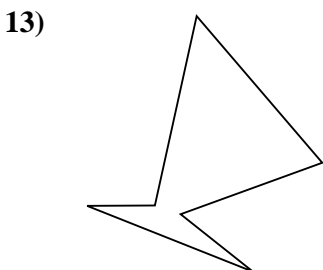
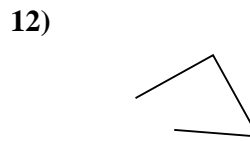
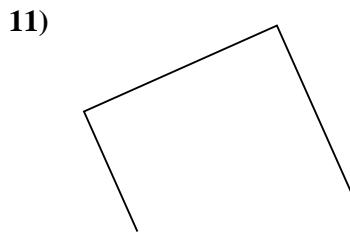
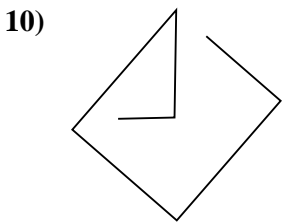
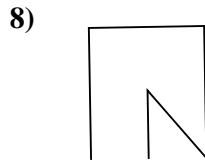
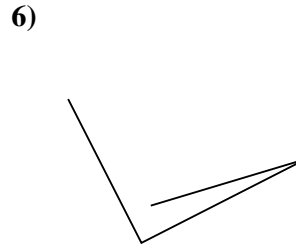
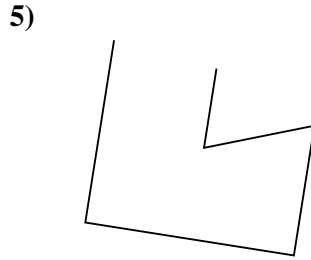
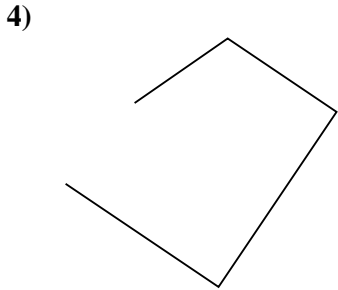
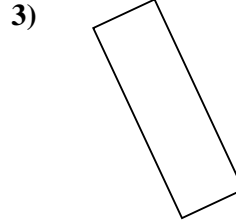
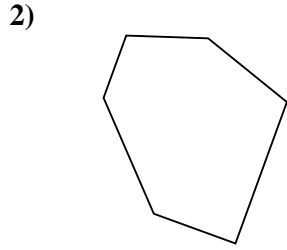
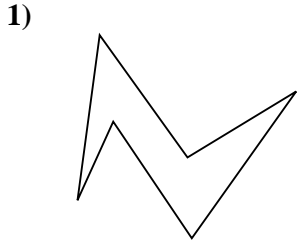
13. Autre

14. Autre

15. Autre



Determinez si la figure montrée est un 'Triangle', 'Carrée', 'Rectangle', 'Hexagone' or 'Autre'.

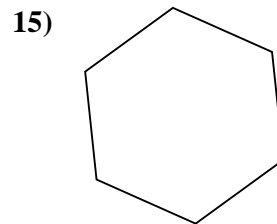
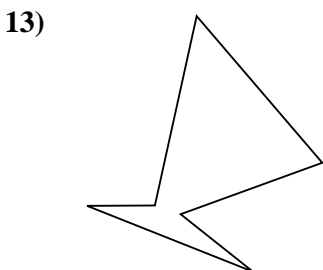
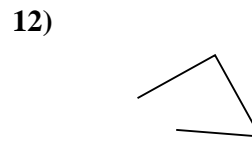
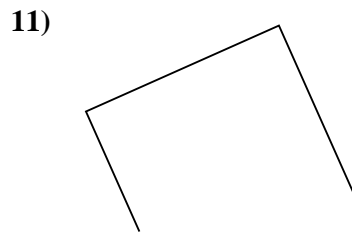
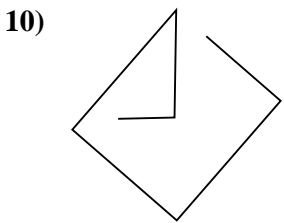
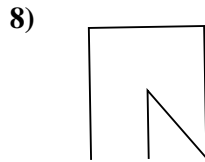
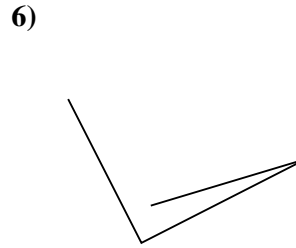
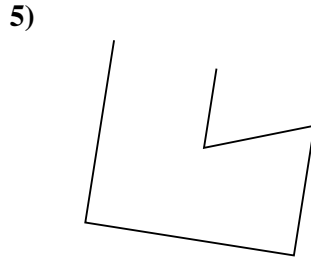
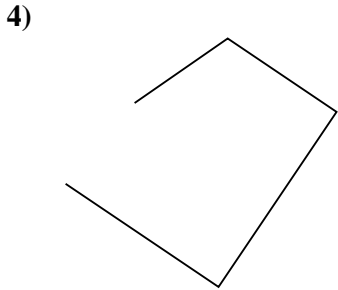
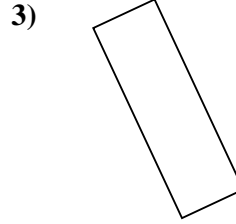
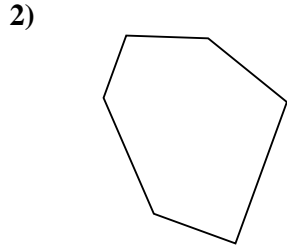
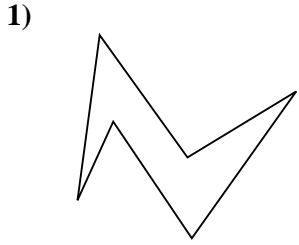


Réponses

- 1. _____
- 2. _____
- 3. _____
- 4. _____
- 5. _____
- 6. _____
- 7. _____
- 8. _____
- 9. _____
- 10. _____
- 11. _____
- 12. _____
- 13. _____
- 14. _____
- 15. _____



Determinez si la figure montrée est un 'Triangle', 'Carrée', 'Rectangle', 'Hexagone' or 'Autre'.



Réponses

1. Hexagone

2. Hexagone

3. Rectangle

4. Autre

5. Autre

6. Autre

7. Rectangle

8. Autre

9. Triangle

10. Autre

11. Autre

12. Autre

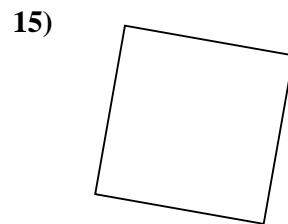
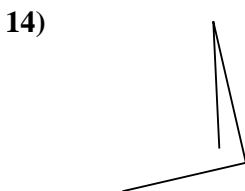
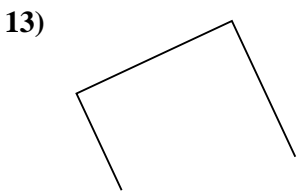
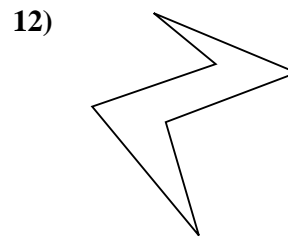

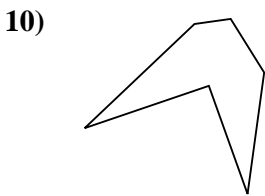
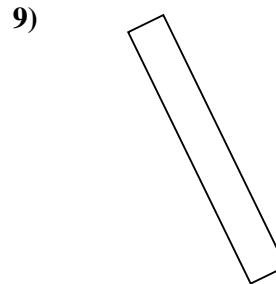
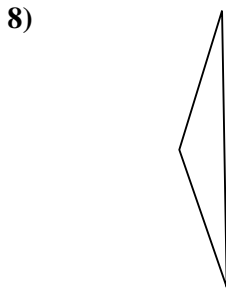
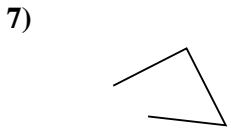
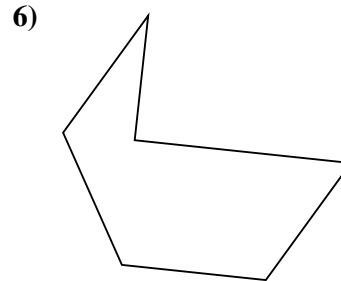
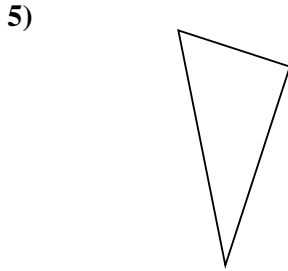
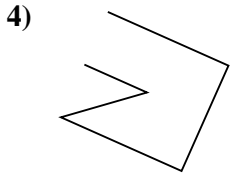
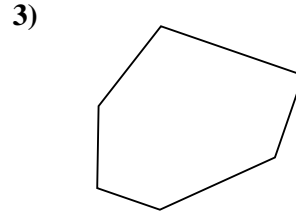
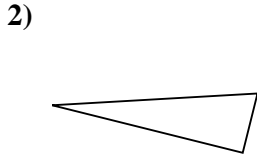
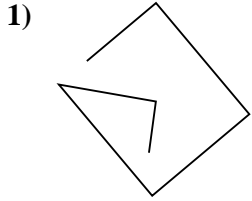
13. Hexagone

14. Hexagone

15. Hexagone



Determinez si la figure montrée est un 'Triangle', 'Carrée', 'Rectangle', 'Hexagone' or 'Autre'.

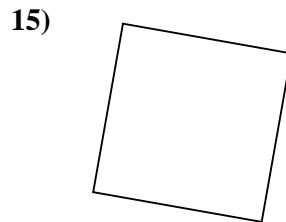
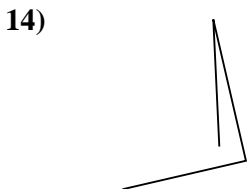
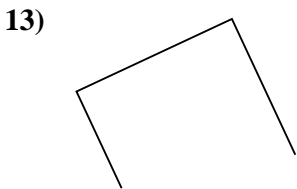
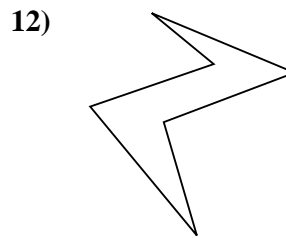

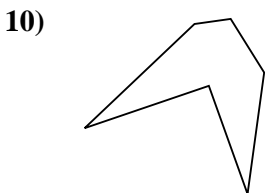
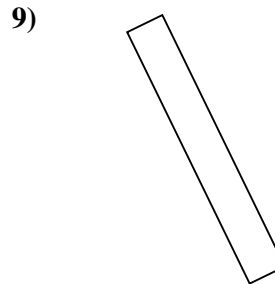
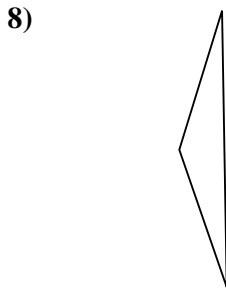
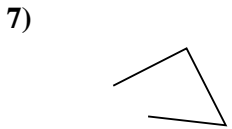
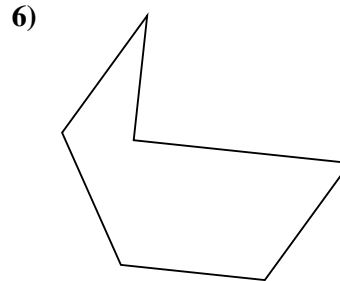
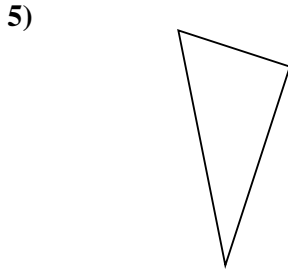
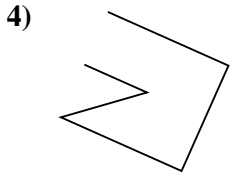
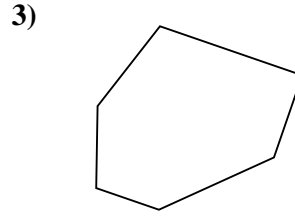
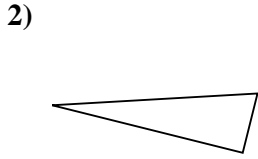
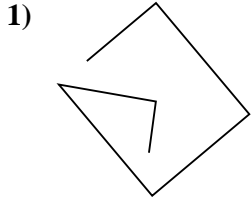


Réponses

- 1. _____
- 2. _____
- 3. _____
- 4. _____
- 5. _____
- 6. _____
- 7. _____
- 8. _____
- 9. _____
- 10. _____
- 11. _____
- 12. _____
- 13. _____
- 14. _____
- 15. _____



Determinez si la figure montrée est un 'Triangle', 'Carrée', 'Rectangle', 'Hexagone' or 'Autre'.



Réponses

1. Autre

2. Triangle

3. Hexagone

4. Autre

5. Triangle

6. Hexagone

7. Autre

8. Triangle

9. Rectangle

10. Hexagone

11. Triangle

12. Hexagone

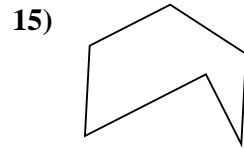
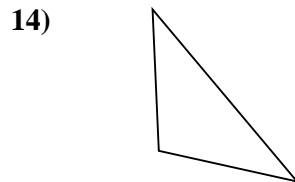
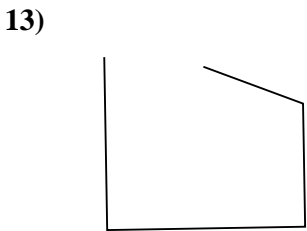
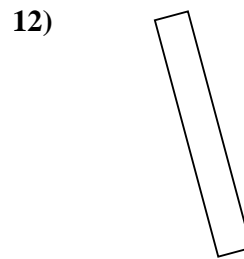
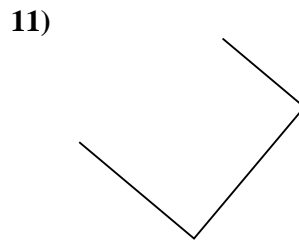
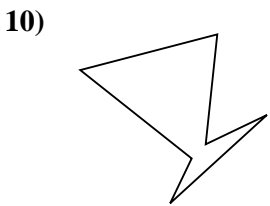
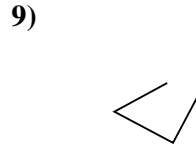
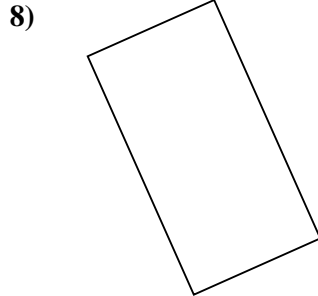
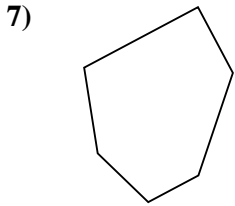
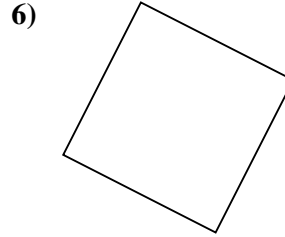
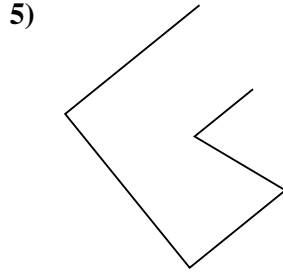
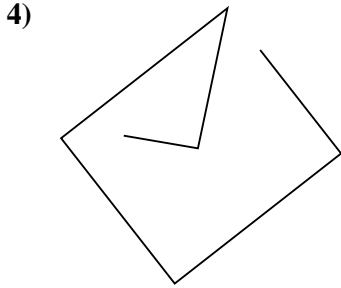
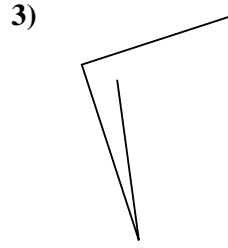
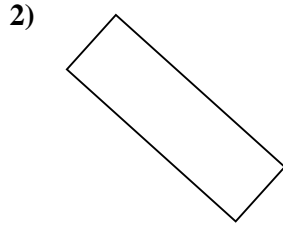

13. Autre

14. Autre

15. Carrée



Determinez si la figure montrée est un 'Triangle', 'Carrée', 'Rectangle', 'Hexagone' or 'Autre'.

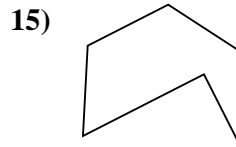
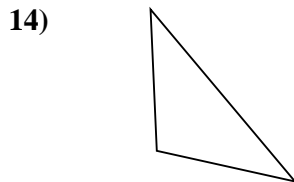
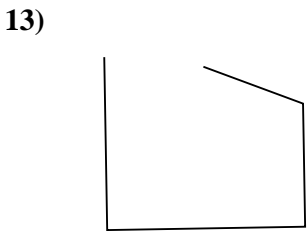
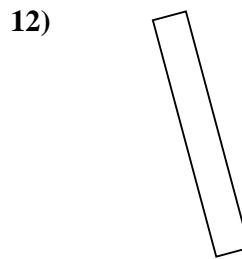
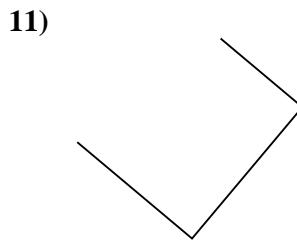
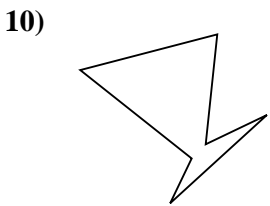
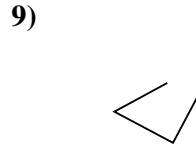
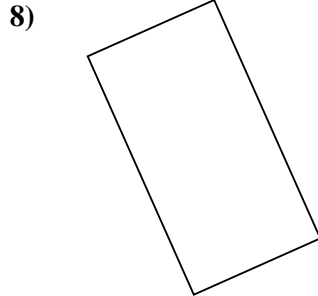
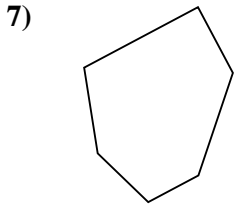
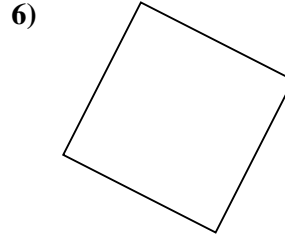
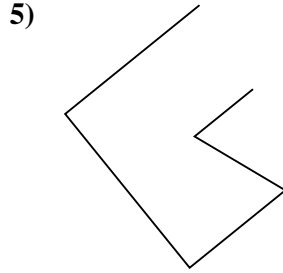
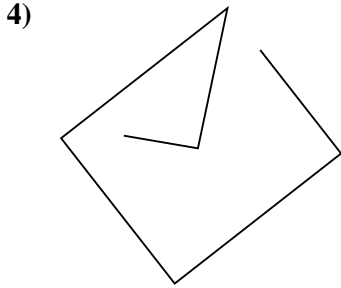
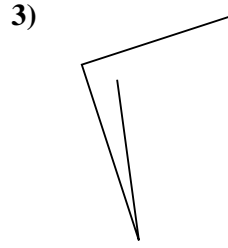
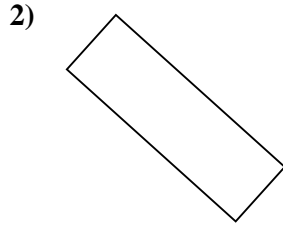



Réponses

- 1. _____
- 2. _____
- 3. _____
- 4. _____
- 5. _____
- 6. _____
- 7. _____
- 8. _____
- 9. _____
- 10. _____
- 11. _____
- 12. _____
- 13. _____
- 14. _____
- 15. _____



Determinez si la figure montrée est un 'Triangle', 'Carrée', 'Rectangle', 'Hexagone' or 'Autre'.



Réponses

1. Triangle

2. Rectangle

3. Autre

4. Autre

5. Autre

6. Carrée

7. Hexagone

8. Rectangle

9. Autre

10. Hexagone

11. Autre

12. Rectangle

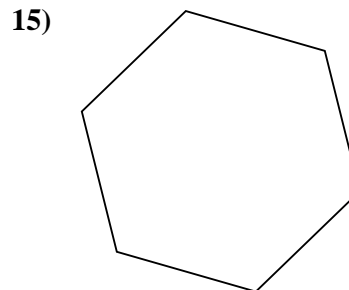
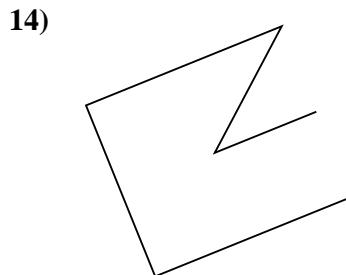
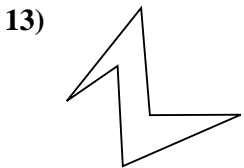
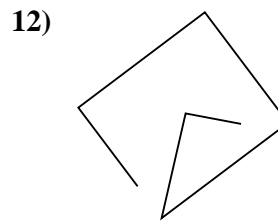
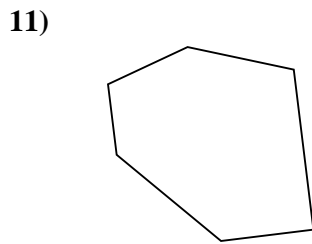
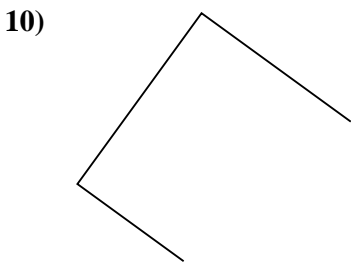
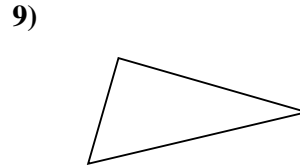
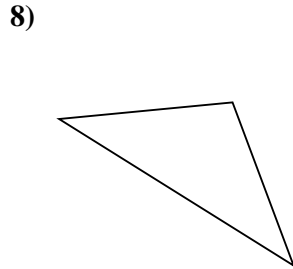
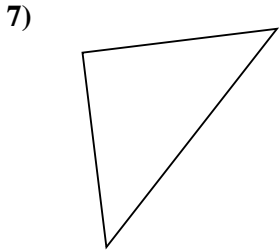
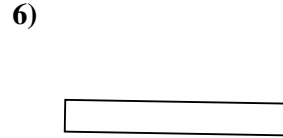
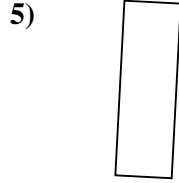
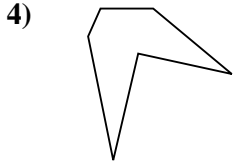
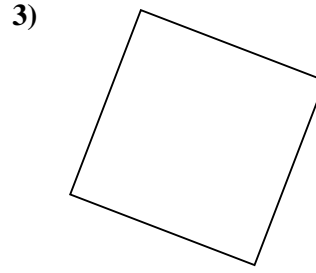
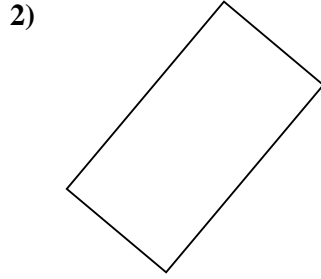
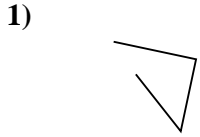
13. Autre

14. Triangle

15. Hexagone



Determinez si la figure montrée est un 'Triangle', 'Carrée', 'Rectangle', 'Hexagone' or 'Autre'.

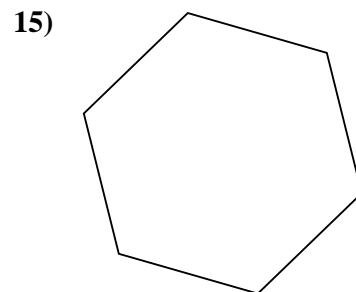
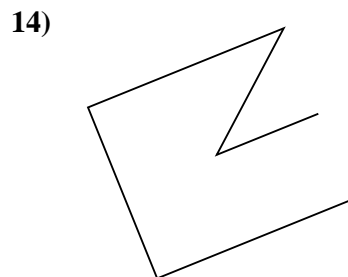

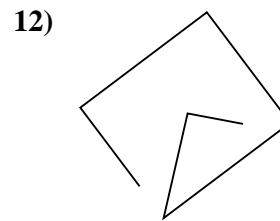
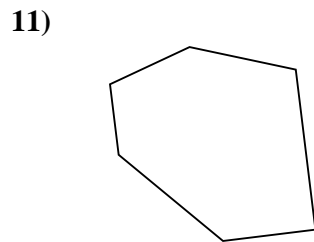
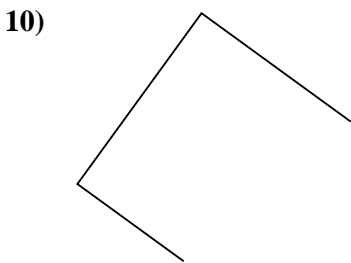
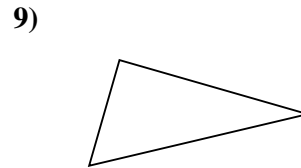
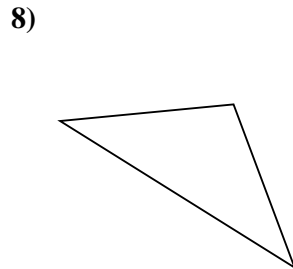
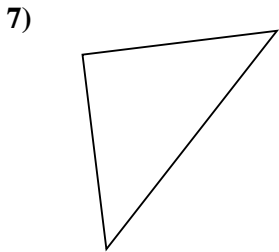
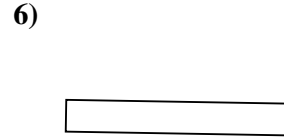
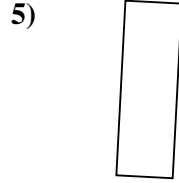
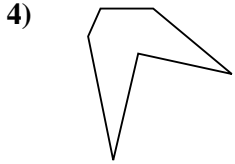
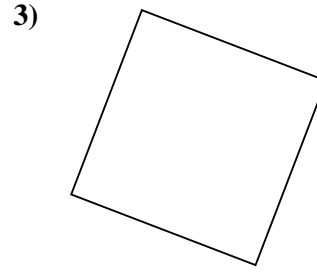
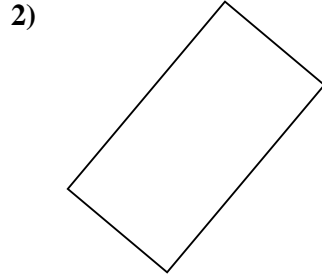


Réponses

- 1. _____
- 2. _____
- 3. _____
- 4. _____
- 5. _____
- 6. _____
- 7. _____
- 8. _____
- 9. _____
- 10. _____
- 11. _____
- 12. _____
- 13. _____
- 14. _____
- 15. _____



Déterminez si la figure montrée est un 'Triangle', 'Carrée', 'Rectangle', 'Hexagone' or 'Autre'.



Réponses

1. Autre

2. Rectangle

3. Carrée

4. Hexagone

5. Rectangle

6. Rectangle

7. Triangle

8. Triangle

9. Triangle

10. Autre

11. Hexagone

12. Autre

13. Hexagone

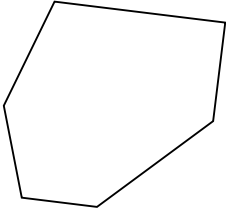
14. Autre

15. Hexagone

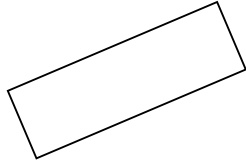


Determinez si la figure montrée est un 'Triangle', 'Carrée', 'Rectangle', 'Hexagone' or 'Autre'.

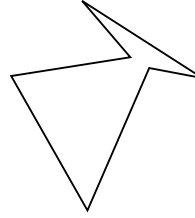
1)



2)



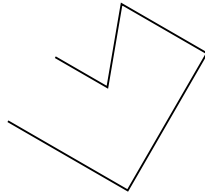
3)



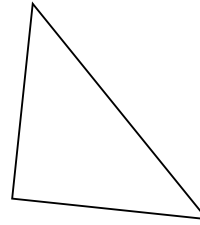
4)



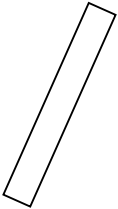
5)



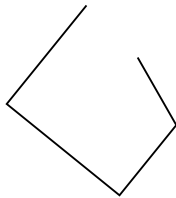
6)



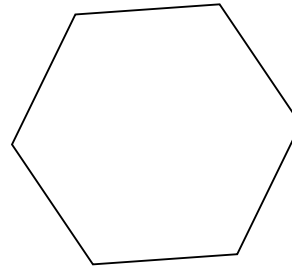
7)



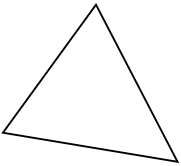
8)



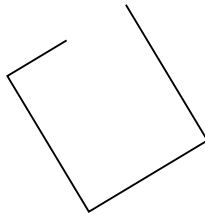
9)



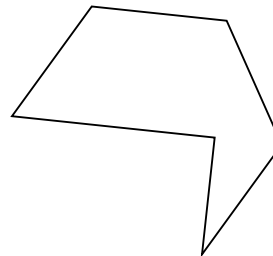
10)



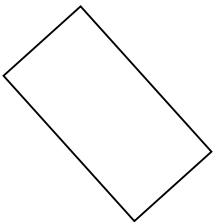
11)



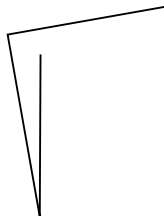
12)



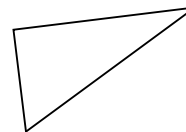
13)



14)



15)



Réponses

1. _____

2. _____

3. _____

4. _____

5. _____

6. _____

7. _____

8. _____

9. _____

10. _____

11. _____

12. _____

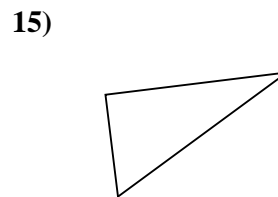
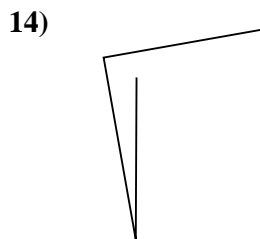
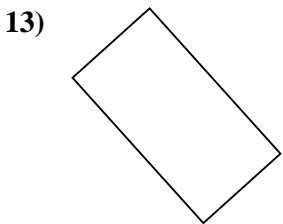
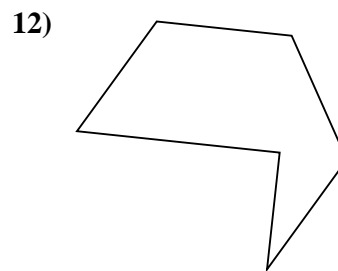
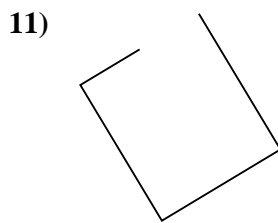
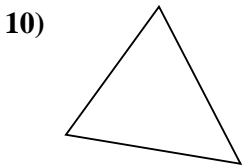
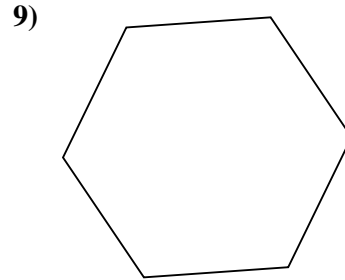
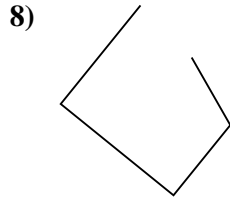
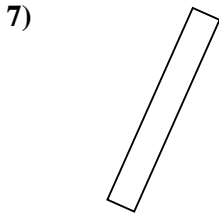
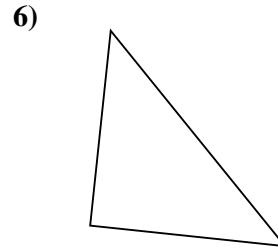
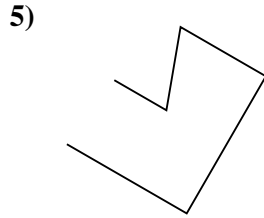
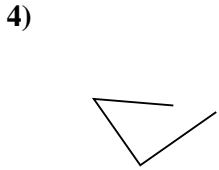
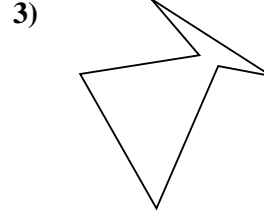
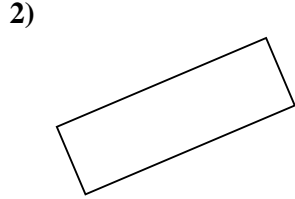
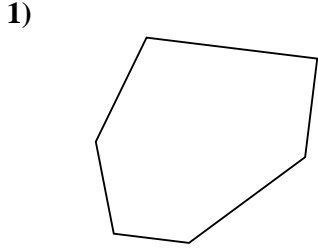
13. _____

14. _____

15. _____



Déterminez si la figure montrée est un 'Triangle', 'Carrée', 'Rectangle', 'Hexagone' or 'Autre'.



Réponses

1. Hexagone

2. Rectangle

3. Hexagone

4. Autre

5. Autre

6. Triangle

7. Rectangle

8. Autre

9. Hexagone

10. Triangle

11. Autre

12. Hexagone

13. Rectangle

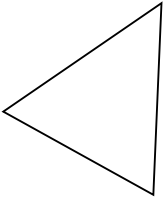
14. Autre

15. Triangle

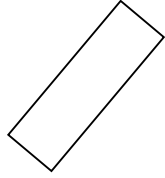


Determinez si la figure montrée est un 'Triangle', 'Carrée', 'Rectangle', 'Hexagone' or 'Autre'.

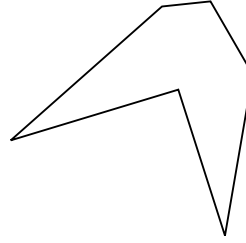
1)



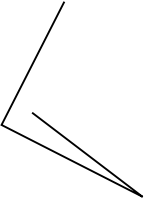
2)



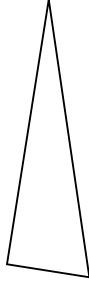
3)




4)



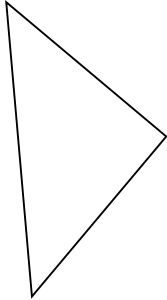
5)



6)



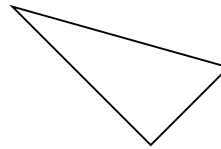
7)




8)



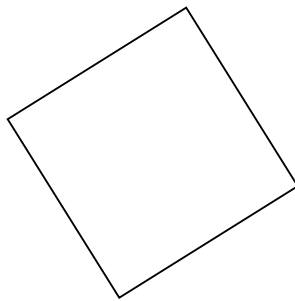
9)



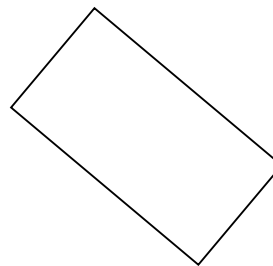
10)



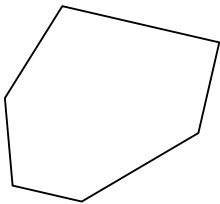
11)



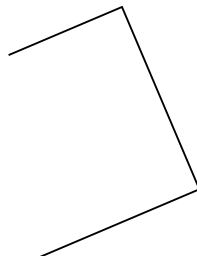
12)



13)



14)



15)



Réponses

1. _____

2. _____

3. _____

4. _____

5. _____

6. _____

7. _____

8. _____

9. _____

10. _____

11. _____

12. _____

13. _____

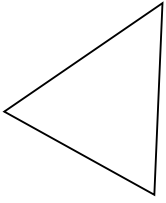
14. _____

15. _____

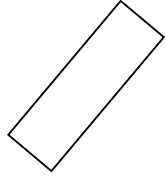


Determinez si la figure montrée est un 'Triangle', 'Carrée', 'Rectangle', 'Hexagone' or 'Autre'.

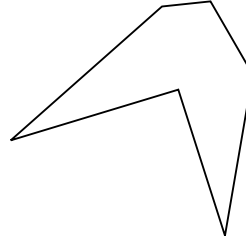
1)



2)



3)



Réponses

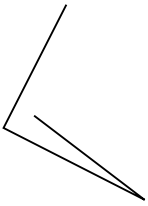
1. Triangle

2. Rectangle

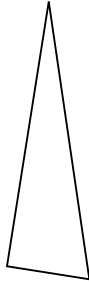
3. Hexagone

4. Autre


4)



5)



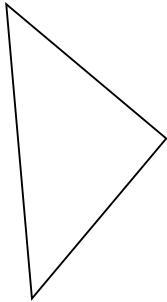
6)



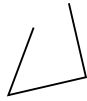
5. Triangle

6. Autre

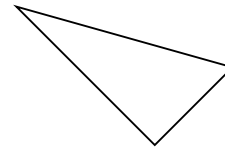
7)



8)



9)




7. Triangle

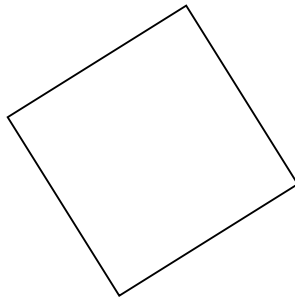
8. Autre

9. Triangle

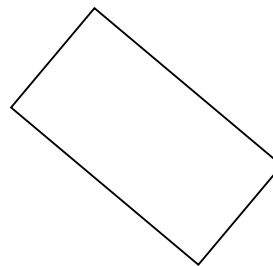
10)



11)



12)



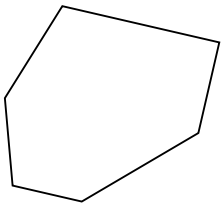
10. Hexagone

11. Carrée

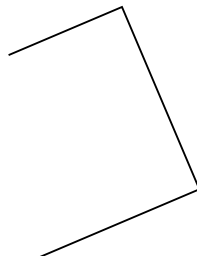
12. Rectangle

13. Hexagone

13)



14)



15)

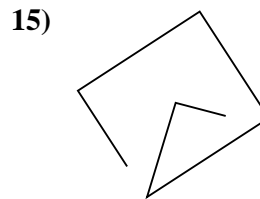
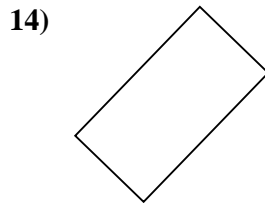
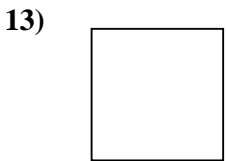
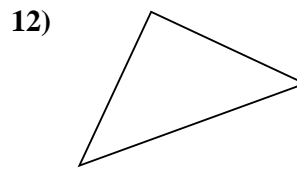
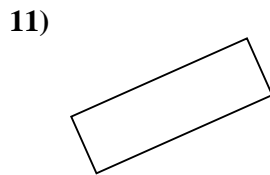
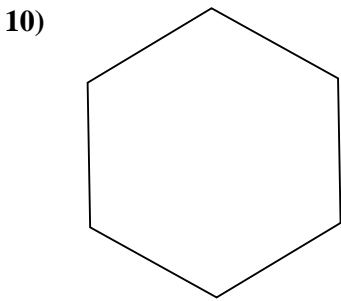
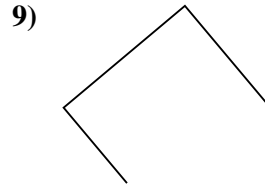
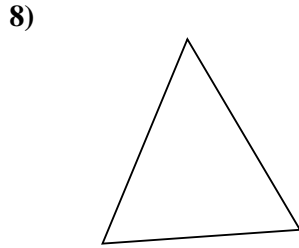
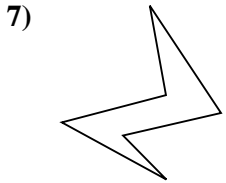
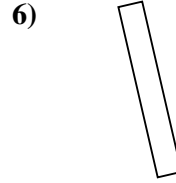
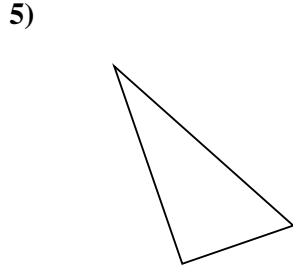

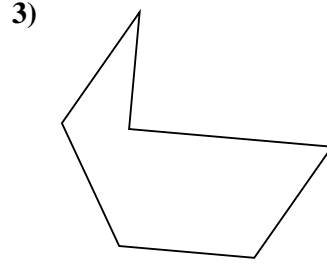
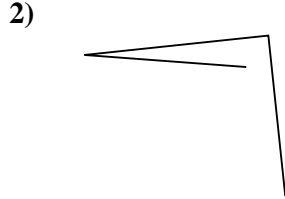
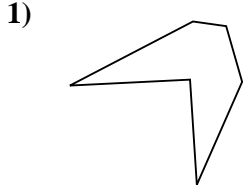


14. Autre

15. Autre



Determinez si la figure montrée est un 'Triangle', 'Carrée', 'Rectangle', 'Hexagone' or 'Autre'.

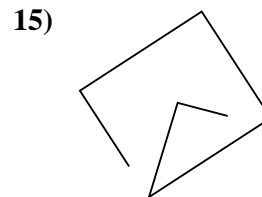
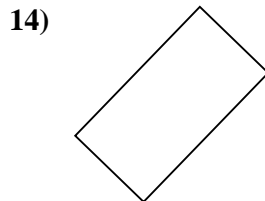
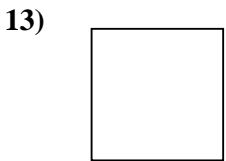
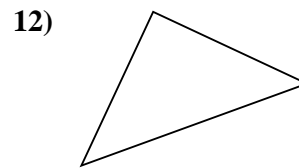
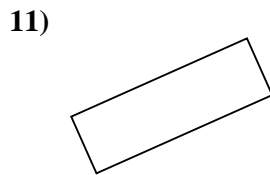
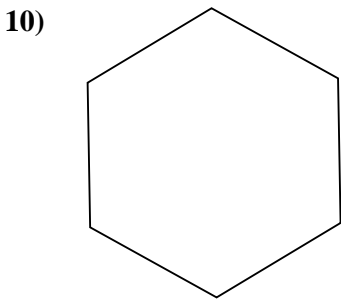
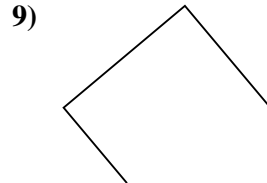
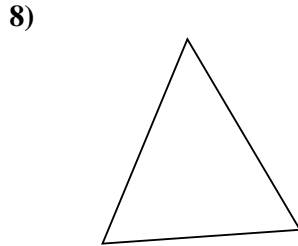
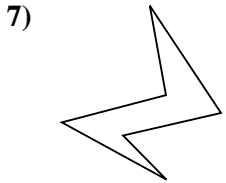
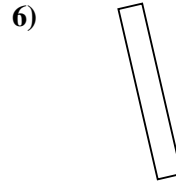
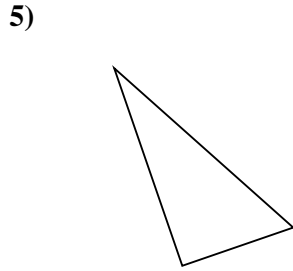

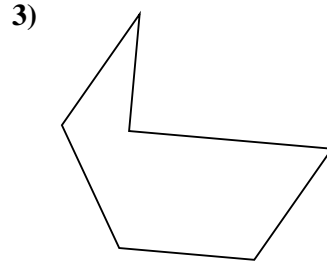
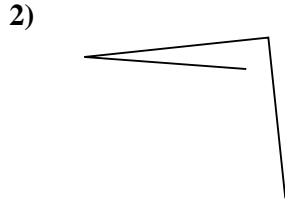
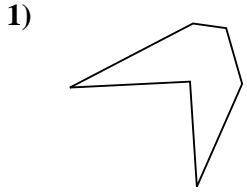


Réponses

- 1. _____
- 2. _____
- 3. _____
- 4. _____
- 5. _____
- 6. _____
- 7. _____
- 8. _____
- 9. _____
- 10. _____
- 11. _____
- 12. _____
- 13. _____
- 14. _____
- 15. _____



Determinez si la figure montrée est un 'Triangle', 'Carrée', 'Rectangle', 'Hexagone' or 'Autre'.



Réponses

1. Hexagone

2. Autre

3. Hexagone

4. Hexagone

5. Triangle

6. Rectangle

7. Hexagone

8. Triangle

9. Autre

10. Hexagone

11. Rectangle

12. Triangle

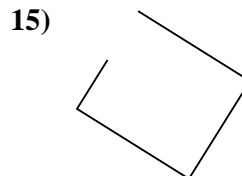
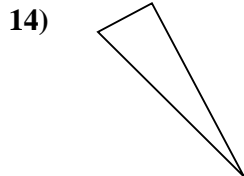
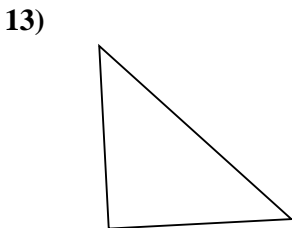
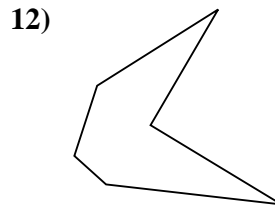
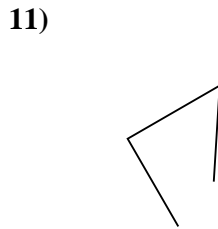
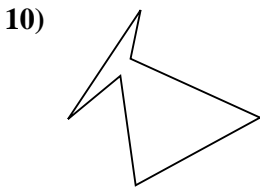
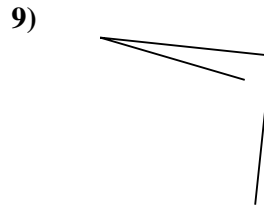
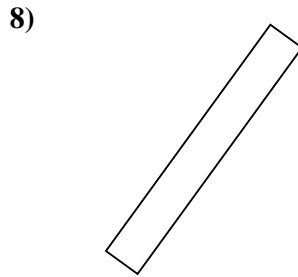
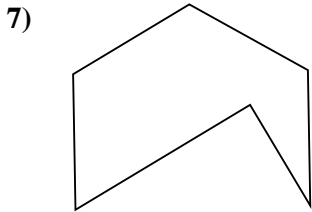
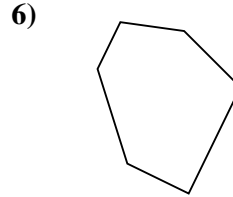
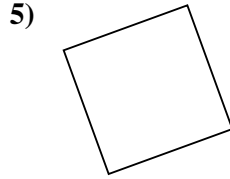

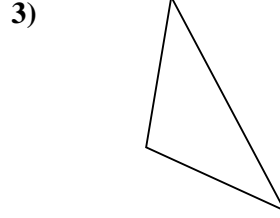
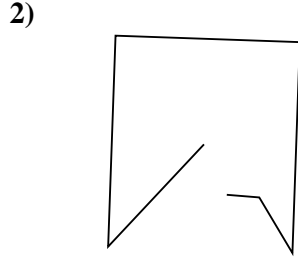
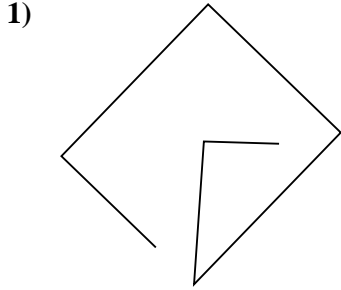
13. Carrée

14. Rectangle

15. Autre



Determinez si la figure montrée est un 'Triangle', 'Carrée', 'Rectangle', 'Hexagone' or 'Autre'.

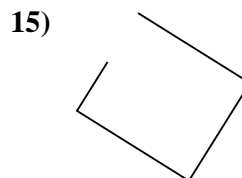
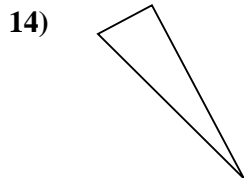
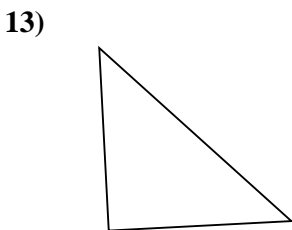
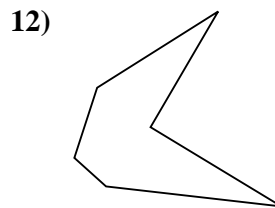
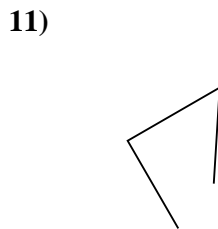
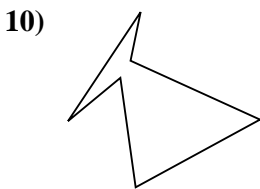

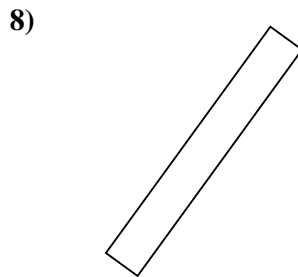
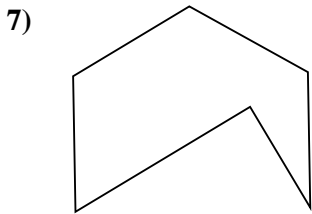
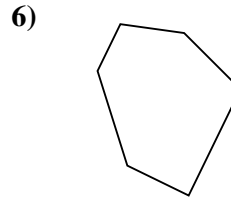
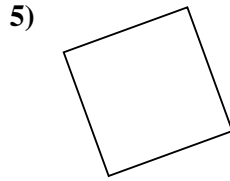

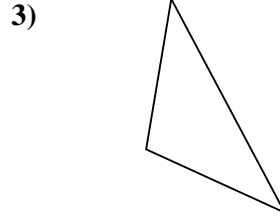
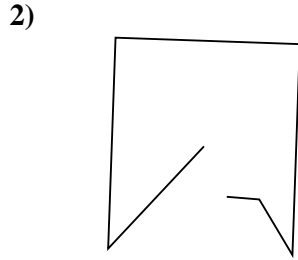
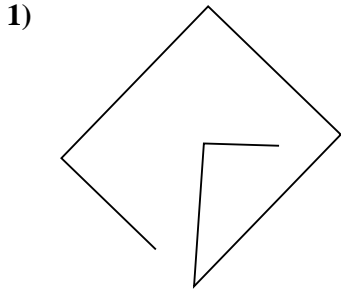


Réponses

- 1. _____
- 2. _____
- 3. _____
- 4. _____
- 5. _____
- 6. _____
- 7. _____
- 8. _____
- 9. _____
- 10. _____
- 11. _____
- 12. _____
- 13. _____
- 14. _____
- 15. _____



Determinez si la figure montrée est un 'Triangle', 'Carrée', 'Rectangle', 'Hexagone' or 'Autre'.



Réponses

1. Autre

2. Autre

3. Triangle

4. Hexagone

5. Carrée

6. Hexagone

7. Hexagone

8. Rectangle

9. Autre

10. Hexagone

11. Autre

12. Hexagone

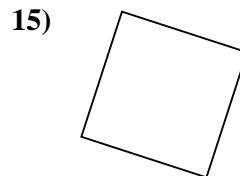
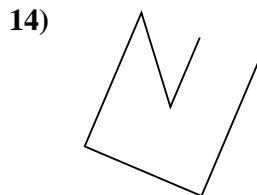
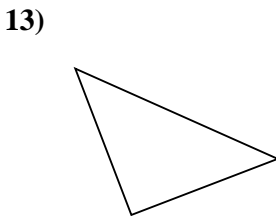
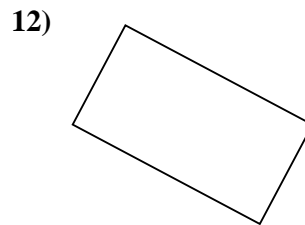
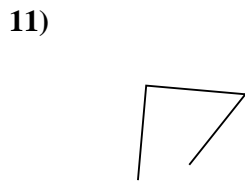
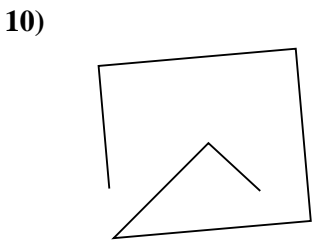
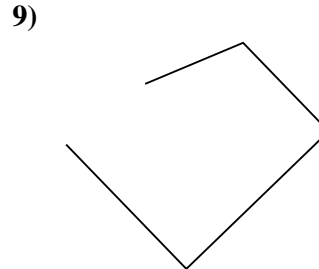
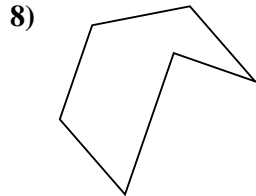
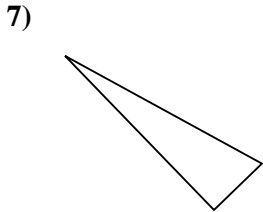
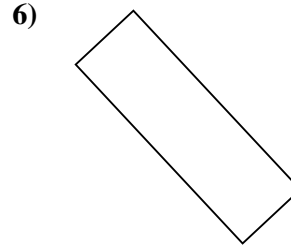
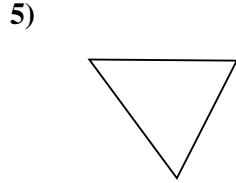
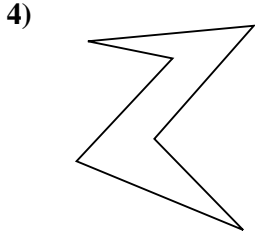
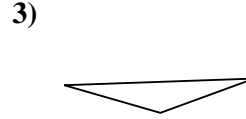
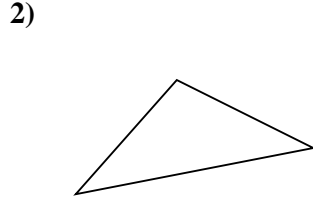
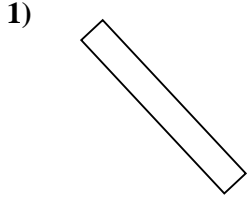
13. Triangle

14. Triangle

15. Autre



Determinez si la figure montrée est un 'Triangle', 'Carrée', 'Rectangle', 'Hexagone' or 'Autre'.

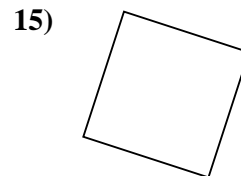
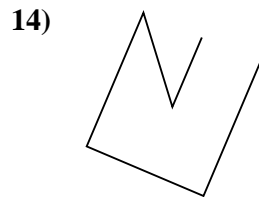
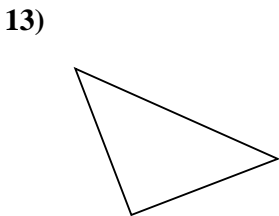
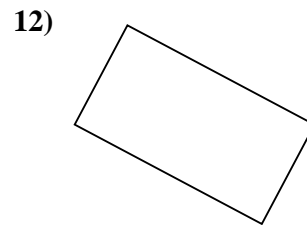
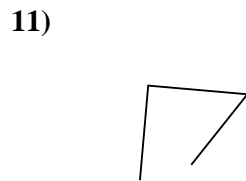
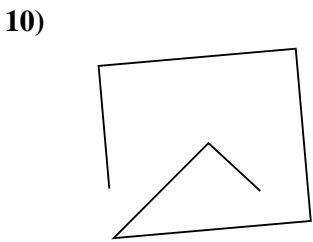
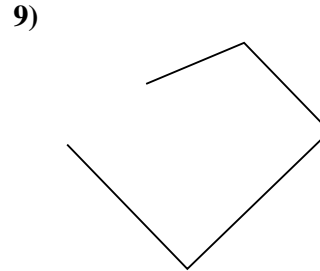
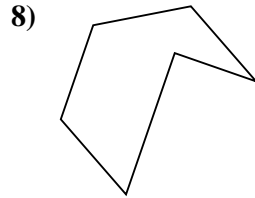
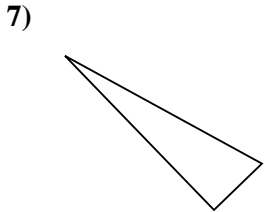
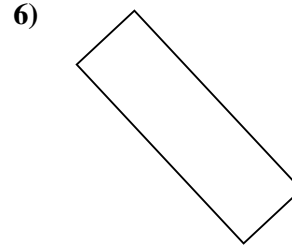
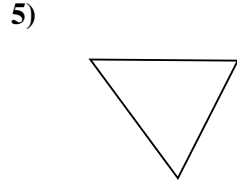
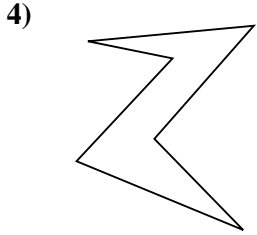
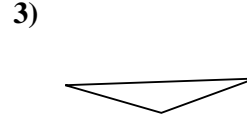
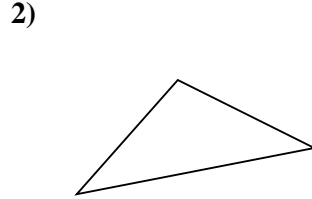
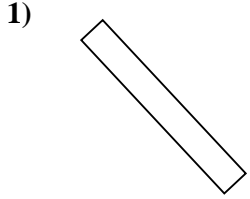


Réponses

- 1. _____
- 2. _____
- 3. _____
- 4. _____
- 5. _____
- 6. _____
- 7. _____
- 8. _____
- 9. _____
- 10. _____
- 11. _____
- 12. _____
- 13. _____
- 14. _____
- 15. _____



Determinez si la figure montrée est un 'Triangle', 'Carrée', 'Rectangle', 'Hexagone' or 'Autre'.



Réponses

1. Rectangle

2. Triangle

3. Triangle

4. Hexagone

5. Triangle

6. Rectangle

7. Triangle

8. Hexagone

9. Autre

10. Autre

11. Autre

12. Rectangle

13. Triangle

14. Autre

15. Carrée

